



Delhi Public School, Gandhinagar
MOCK PAPER FOR SAFAL (2022-23)

Class:III

EVS

Date:

Time:

M. Marks: 30

Name: _____

Q. Tick the correct option-

1. Which game does not need a ball to play?

a) Soccer

b) Golf

c) Table tennis

c) Badminton

2. Which term is used for 100 runs in cricket?

a) Sanctuary

b) Century

c) Half century

d) Double century

3. The shape of leaves can be-

a) Round

b) Triangular

c) Long

d) All of these

4. Which of the following has thick trunk?

a) Neem

b) Tulsi

c) Mint

d) Rose

5. A plant that can survive without water for many days is _____




6. My _____ is not a member of my family.

a) Mother

b) Father

- c) Best friend
d) Brother
7. Our _____ is our first school.
a) Primary School
b) Play School
c) Family
d) None of these
8. A child learns _____ from his family
a) Values
b) Traditions and Customs
c) Discipline
d) All of these
9. A clean house is free from _____
a) Water
b) Sunlight
c) Diseases
d) Heat
10. _____ catches its prey by weaving a web.



11. Besides dosa, _____ is made from rice.
a) Halwa
b) Chapati
c) Pulao
d) All of these
12. Our food is usually made out of those things that are
a) Cheap
b) Easily grown there
c) Packed nicely
d) None of these
13. Postal Index Number (Pin code) is of _____ digits
a) 9 digits
b) 6 digits
c) 5 digits
d) None of these
14. In _____ the hands and face are used to convey feelings.

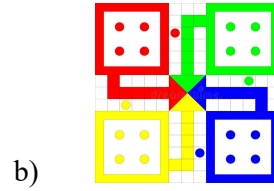
a) Dancing

b) Singing


c) Running

d) Walking

15. Which game needs a very big ground to play?



16. The _____ eats dead animals.



17. _____ is a liquid cooking fuel.

a) Coal

b) Kerosene

c) Petrol

d) All of these

18. Which of the following is not a means of public transport?


a) Double – Decker Bus

b) Train


c) Metro

d) Cycle

19. Which of these do not run on electricity?



20. Rahul noticed leakage of water line in his bathroom. Whom do you think he will call to repair the water leakage?



21. Braille script is based on

a) Four points

b) Five points

c) Six points

d) Two points

22. What kind of problem do people have in old age?

a) They could not see properly

b) They have pain in the knees and other joints.

c) They could not hear properly.

d) All of the above

23. Which of the following is used in skin disorders?

a) Peppermint

b) Sandal wood

c) Tulsi

d) Both (a) and (b)

