

Delhi Public School, Gandhinagar 2025-26
CLASS -I SCIENCE [ISCO]

Student Name:		
Total Questions : 20	Guidelines for the Candidate	Time : 1 hour
1.	Additional 10 minutes will be given to the students to fill up the students' information before the start of the exam.	
2.	All questions are compulsory. There is no negative marking. Use of calculator is not permitted.	
3.	Write your Roll no, Name and Class clearly on the answer sheet and do not forget to sign.	
4.	There is only one correct answer hence mark one choice only.	
5.	Darken your choice with HB pencil or Blue/Black ball point pen.	
6.	Rough work should be done in the blank space provided in the booklet.	
7.	Return the answer sheet to the invigilator at the end of the exam. The question paper can be retained by the student.	

1. Select the seedless fruit.

A.



B.



C.



D.



2. Which of the following is the natural source of light?

A. The lamp

B. The candle

C. The sun

D. The torch

3. Which part of the plant helps it to breathe?

A.



B.



C.



D.



4. We use _____ in the rainy season.

A. Umbrella

B. Gloves





C. Muffler

D. Cap

5. Rekha is brushing her teeth. She has kept the water open. This shows that

- A. She is wasting water
- B. She is storing water
- C. She is conserving water
- D. She is saving water

6. Select the correct option.



- A.  lives in water
- B.  lives in den
- C.  lives in kennel
- D.  lives on a tree

7. Diya's birthday is on 3rd Wednesday of September 20XX, then on which date is her birthday?

SEPTEMBER 20XX						
MON	TUES	WED	THUR	FRI	SAT	SUN
		1	2	3	4	5
6	7	8	9	10	11	12
13	14	15	16	17	18	19
20	21	22	23	24	25	26
27	28	29	30			

- A. 22nd
- B. 15th
- C. 29th
- D. 1st

8. We get wool from

A. 	B. 	C. 	D. 
---	---	---	---

9. The tool shown in the picture is used by



A. Teacher

B. Gardener

C. Policeman

D. Doctor

10. Select the correct sequence of words to complete the paragraph given below.

Summer days are _____ while winter days are _____. A strong wind blows on _____. Monsoon days are _____.

A. Cold, hot, rainy, a windy day

B. Hot, cold, a windy day, rainy

C. A windy day, cold, hot, rainy

D. Rainy, hot, cold, a windy day

11. Which of the following is NOT a milk product?



A. Curd

B. Butter

C. Potato

D. Cheese

12. Everyone decorates their houses with decorative lights, diyas and rangoli in which festival?

A. 	B. 	C. 	D. 
---	---	---	---

13. Match the following

- A.** a.-ii., b.-iii., c.-i.
- B.** a.-iii., b.-ii., c.-i.
- C.** a.-iii., b.-i., c.-ii.
- D.** A.-I, b.-ii., c.-iii.

a. Bird	i. Tiger
b. Animal	ii. Mosquito
c. Insect	iii. Peacock

14. Select the correct option from the following-

- A.** Teacher teaches us in school.
- B.** Doctor treats patients.
- C.** Barber cuts hair.
- D.** All of the above

15. In the annual function of a school, students wore _____ to perform on the stage.

- A.** Costume
- B.** Uniform
- C.** Party wear clothes
- D.** Simple clothes

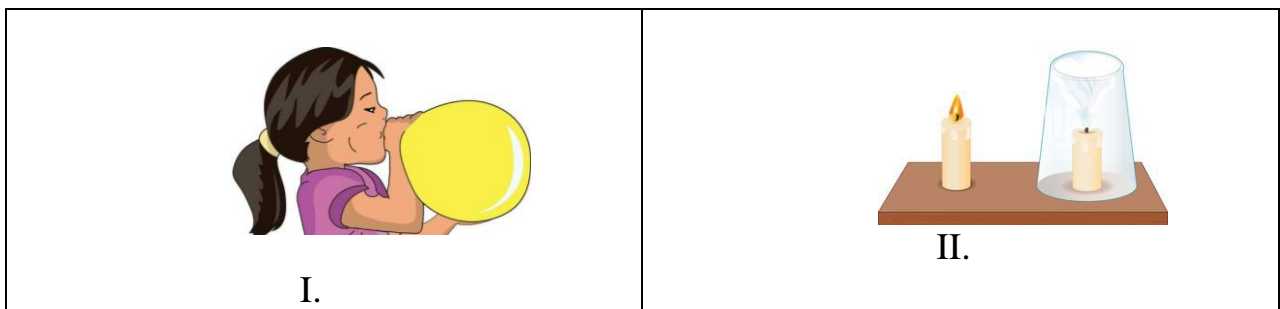
16. Your school bus stops when traffic signal shows _____ light.

- A.** Yellow
- B.** Pink
- C.** Green
- D.** Red

17. Select an incorrect pair.

- A.** Sunny day – Sunglasses
- B.** Cold day – Soup
- C.** Hot day – Sweater
- D.** Rainy day – Rain coat

18. Observe the following pictures and choose the correct options about the picture.



- A. Figure I shows air occupies space.
- B. Figure II shows air helps in burning.
- C. Both figure shows air is important for breathing.
- D. Both A & B

19. Which of the following item can be eaten raw?

- A. Potato
- B. Cauliflower
- C. Onion
- D. Lady's finger

20. Which of the following is a Non living thing?

