



Delhi Public School, Gandhinagar

Half Yearly Sample Paper (2025-26)

Class: I

Computer Science

Date:00/00/25

Time: hours

M. Marks:

Name: _____ Sec: _____ Roll No.: _____

General Instructions:-

- (i) There are 3 Sections in this paper.
- (ii) All the questions are compulsory.
- (iii) Answer the questions as per the instructions.

SECTION A

Q-I Picture quiz.


1. Which of the following is a natural thing?



a) Book



b) Calculator



c) Tree

2. Which of the following runs on electricity?



a) Calculator



b) Camera



c) AC

3. Which of the following runs on battery?



a) Microwave



b) AC



c) Camera

4. What should not be done while using the computer?



a) Keyboard




b) Mouse



c) Pull Wires

5. Which of the following button is pressed to start the computer?



a) Power Button

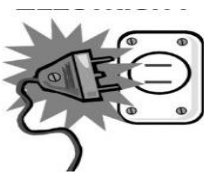


b) Keyboard



c) Mouse

6. What is required to make our computer work?



a) electricity



b) scotty



c) car

7. When we click on the _____, a menu appears.



a) Start Button



b) Camera



c) Book

8. Which of the following is used to select the things on the monitor?



a) CPU



b) Mouse



c) Printer

9. Which of the following is the scanner?



a)



b)



c)




SECTION B

Q-II Write T for True and F for False statements.





1. An umbrella is a natural thing. _____
2. Machines are man-made. _____
3. To switch on the computer, first switch on the CPU. _____
4. The option to shut down a computer is on Start button. _____
5. We cannot play games on a computer. _____
6. Speakers help to listen to music. _____

Q-III Unscramble the jumbled words with the help of given picture.

1.	<table border="1" style="margin: auto; border-collapse: collapse;"> <tr> <td style="padding: 5px;">L</td> <td style="padding: 5px;">A</td> <td style="padding: 5px;">P</td> <td style="padding: 5px;">T</td> <td style="padding: 5px;">P</td> <td style="padding: 5px;">O</td> </tr> <tr> <td style="height: 20px; width: 30px;"></td> <td style="height: 20px; width: 30px;"></td> <td style="height: 20px; width: 30px;"></td> <td style="height: 20px; width: 30px;"></td> <td style="height: 20px; width: 30px;"></td> <td style="height: 20px; width: 30px;"></td> </tr> </table>	L	A	P	T	P	O							
L	A	P	T	P	O									





<div>P A E P R</div> <div></div>	
<div>P R I N T R E</div> <div></div>	
<div>T A L B E T</div> <div></div>	

Q-IV Write “N” for natural things and “M” for manmade things in the given circles.





1.		Stars	<input type="text"/>
3.		Moon	<input type="text"/>
2.		Mouse	<input type="text"/>
4.		Mobile	<input type="text"/>

SECTION C

Q-V Riya wants to switch on her computer. Can you help her by writing the correct order in the boxes provided.



Q-VI Write “E” for machines that run on electricity and “B” for the machines that run on a battery in the given circles.

1. Clock	 <input type="radio"/>	3. Microwave	 <input type="radio"/>
2. Digital camera	 <input type="radio"/>	4. Juicer	 <input type="radio"/>

Q-VII Word Grid.

[STARS , SHUTDOWN, SPEAKER, MOUSE]

S	T	A	R	S	M	U	S
R	B	C	D	E	O	F	P
E	H	I	K	L	U	M	E
Q	I	O	P	R	S	T	A
W	S	D	G	F	E	J	K
X	E	R	T	U	R	O	E
U	X	C	V	B	E	N	R
S	H	U	T	D	O	W	N

ANSWER KEY:

Section A

Q.I. Picture Quiz

1.(c)Tree, 2(c) AC, 3(c) Camera ,4(c) wire, 5(a) Power Button, 6(a)Electricity,7(a) Start Button,8(b)Mouse
9(a)Scanner

Section B

Q.II. Write True or False.

1.F, 2.T, 3.F,4.T,5.F,6.T

Q.III. Unscramble the jumbled words.


1-LAPTOP, 2-PAPER, 3-PRINTER, 4-TABLET

Q.IV. Write N for natural things and M for manmade things.


1.Tree-N, 2.Mouse-M, 3.Moon-N, 4.Mobile-M

Section C


Q.V. Aashi wants to switch on her computer. Can you help her by writing the correct order in the boxes provided.




2



1



4



3

Q.VI Write “E” for machines that run on electricity and “B” for the machines that run on a battery in the given circles.

Ans: 1- Battery ,2-Battery,3-Electricity,4-Electricity

Q.VII Word Grid. [STARS , SHUTDOWN, SPEAKER, MOUSE]

S	T	A	R	S	M	U	S
R	B	C	D	E	O	F	P
E	H	I	K	L	U	M	E
Q	I	O	P	R	S	T	A
W	S	D	G	F	E	J	K
X	E	R	T	U	R	O	E
U	X	C	V	B	E	N	R
S	H	U	T	D	O	W	N