

DPSG 3(SCIENCE OLYMPIAD PAPER)



Delhi Public School, Gandhinagar
OLYMPIAD SAMPLE PAPER- 2025-26

Class III

SCIENCE



Date:

Time: 2 hours

M. Marks: 50

Name: _____ Sec: _____ Roll No.: _____

MENTAL ABILITY

1. If 'pencil' means 'eraser', 'eraser' means 'sharpener' and 'sharpener' means 'book', then which of the following is used to sharp a pencil?
a. Pencil
b. Eraser
c. Sharpener
d. Book
2. If  stands for 50 people, then 7  will stand for _____ people.
a. 400
b. 700
c. 450
d. 350
3. If Rahul puts exactly 2 fish in each fishbowl, how many fish will he use to put in 20 bowls?
a. 42
b. 22
c. 40
d. 20
4. Which is true?
a. $6,293 > 4,526$
b. $4,521 < 4,297$
c. $6,113 > 6,169$
d. $6,750 = 6,150$
5. Which means seven thousand five hundred ninety two?
a. 7920
b. 7592
c. 75902
d. 7529
6. In one trip a car can take 6 people. In how many trips can it take 30 people?
a. 5 trips
b. 6 trips
c. 4 trips
d. 10 trips
7. Riya while driving sees the following road sign. She should _____.



- a. Take a right turn.
- b. Slow down
- c. Stop blowing horn.
- d. Stop to let the train cross

SCIENCE

8. I am a part of the leaf that carries water to it. I give rise to many thinner branches. I am a _____.

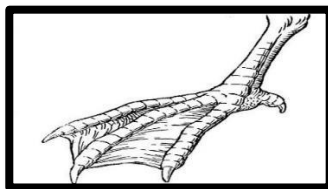
a. Leaf blade
b. Lamina
c. Mid Vein
d. None of these

9. Unscramble the letters given in the box to get the name of an animal.

A E W R T M O R H


a. It sucks blood.
b. It carries load for us.
c. It has a long sticky tongue.
d. It swallows soil.

10. The bird whose foot is shown in the figure most probably lives in / on _____.



a. Trees
b. Pond
c. Caves
d. Cannot say

11. What is the function of part P of a mango fruit?




a. It gives sweet taste to the fruit.
b. It helps in ripening of fruit.
c. It gives rise to a new mango plant.
d. None of these

12. Air we breathe in, enters our body through -----, then it enters first into -----and then ----- . It comes out through -----.

a. Nose, lungs, wind pipe, nose
b. Nose, food pipe, lungs, nose
c. Mouth, food pipe, lungs, mouth
d. Nose, wind pipe, lungs, nose

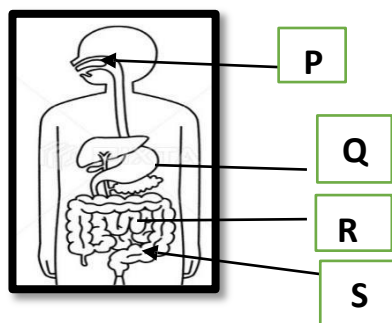
13. Select the correct statement about the clothes made of fibre obtained from the following animal.



a. They do not trap air.
b. They keep us warm.
c. They are water proof.
d. They cannot be burnt.

DPSG 3(SCIENCE OLYMPIAD PAPER)

14. The given figure shows the human digestive system. In which labelled part food is both masticated and partially digested.



- a. P b. Q c. R d. S
15. When we see more than half of the Moon, it is called _____ Moon.
a. Gibbous b. Crescent c. Full d. New
16. _____ is the planet in the given sequence.


Mars,	Jupiter,	X,	Uranus
-------	----------	----	--------

a. Neptune b. Saturn c. Venus d. Earth
17. Ravi and Rama were standing as shown here. Ravi waved to Rama and she smiled in reply. Sheet X can be made of _____.



Sheet X

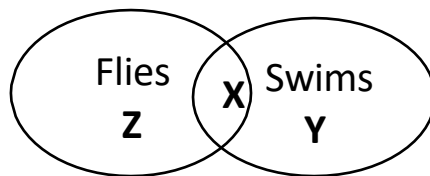
- a. Wood b. Copper c. Rubber d. Glass
18. Feathers that are small, fluffy, soft and keep the bird's body warm are called _____.
a. Flight feathers b. Body feathers
c. Warm feathers d. Down feathers
19. The animal shown in the given picture



- a. Chew the cud b. Is a scavenger
c. Helps to keep the environment clean. d. Both B and C

DPSG 3(SCIENCE OLYMPIAD PAPER)

20. Refer to the given Venn diagram and select the option that is **INCORRECT** regarding birds X, Y and Z.



- a. Y can be ostrich
b. X can be crane
c. Z can be ostrich
d. There is no such bird as Z.
21. Which of the following methods of cooking are healthy for an obese person?
i) Baking ii) Steaming iii) Boiling iv) Frying v) Roasting
a. i, ii and iv only
b. ii, iv and v only
c. iii, iv and v only
d. i, ii, iii and v only
22. If (E) is evaporation, (C) is condensation and (P) is precipitation, the correct sequence of these processes in water cycle is _____.
a. E C P
b. P C E
c. C E P
d. E P C
23. We can have a protein rich diet if we increase the amount of _____ in our diet.

a.



b.




c.



d. Both a and b

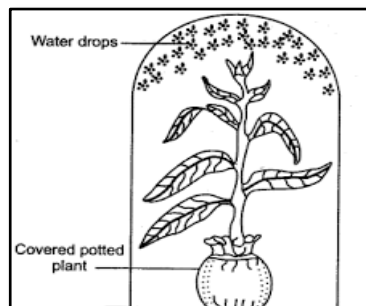
24. The object shown here, does not cast a shadow. It is most likely made of X material. X could be



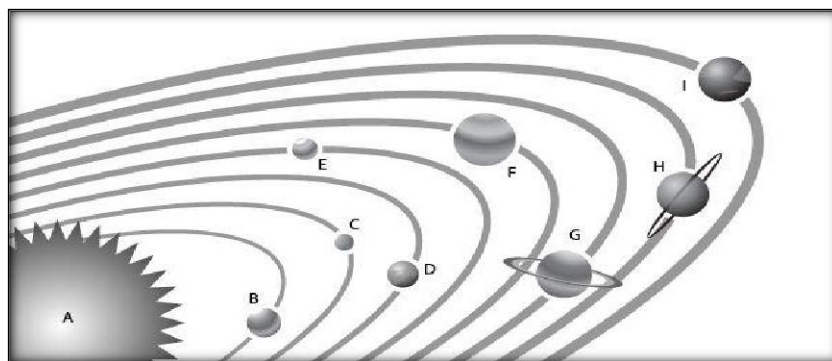
- a. Metal
b. Clear glass
c. Clear Plastic sheet
d. Frosted glass
25. _____ can be used to make handle of a cooking pot.
a. Gold
b. Copper
c. Wood
d. None

DPSG 3(SCIENCE OLYMPIAD PAPER)

26. _____ should be present sufficiently in a healthy house.
- Clean and fresh air
 - Sunlight
 - Mosquitoes
 - Both a and b
27. Select the **INCORRECT** match out of the following.
- Stomach – Digestive System
 - Skull – Skeletal system
 - Backbone – Respiratory System
 - Heart – Circulatory System
28. Plant removes excess water as shown in the given picture. Which process is responsible for the same?



- Photosynthesis
 - Chlorophyll
 - Germination
 - Transpiration
29. The given picture shows that-
-
- The diagram shows a human eye on the left, an open book in the center, and a lit light bulb on the right. A yellow arrow points from the light bulb to the book, and another yellow arrow points from the book to the eye, illustrating the path of light.
- A book emits light
 - Light helps us to see
 - An eye emits light
 - A book helps us to see
30. Name the planet E.



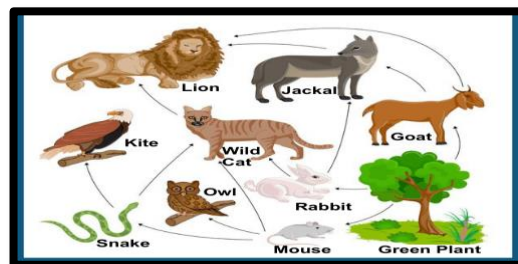
- Jupiter
- Earth
- Mars
- Saturn

DPSG 3(SCIENCE OLYMPIAD PAPER)

31. What is a tool that is used to magnify or enlarge an object's features?
a. balance c. spring scale e. thermometer d. hand lens
32. Solar energy comes from-
a. the Sun b. tides c. oil d. fossils
33. Soil helps trees because soil—
a. Makes food for the trees b. Moves the tree seeds to new places
c. Gives nutrients to the trees d. Turns the roots into new trees
34. The bird that lay its eggs in the nest of a crow is-
a. cuckoo b. pigeon c. parrot d. wood pecker
35. Ducks have-
a. Short and broad beak b. Flat and broad beak.
c. Slender beak d. Pointed beak
36. Which of the following weather conditions would make you put on both raincoat and gumboots?
a. Rain b. Cyclone
c. Snow d. Both a and c
37. The given figure shows a boy inhaling_____and exhaling_____.



- a. oxygen, carbon-dioxide
c. oxygen, oxygen
b. carbon-dioxide, oxygen
d. none of these
38. Select the correct option which on unscrambling gives the name of an animal that gnaws its food-
a. WAERTOMHR b. QUSOTIUM
c. QUSRIERL d. PLEHEATN
39. How many food chains are there in this food-web?



- a. 6 b. 5
c. 4 d. 3

DPSG 3(SCIENCE OLYMPIAD PAPER)

40. Which of the following is a temporary house?

a.



b.



c.



d. All of the above

ANSWER KEY

1.(d)	2. (d)	3. (c)	4. (a)	5. (b)	6. (a)	7.(b)	8. (c)	9. (d)	10. (b)
11. (c)	12. (d)	13. (b)	14. (a)	15. (a)	16. (b)	17.(d)	18. (d)	19. (a)	20. (b)
21. (d)	22.(a)	23. (d)	24. (b)	25.(c)	26.(d)	27.(c)	28. (d)	29. (b)	30. (c)
31. (d)	32. (a)	33. (c)	34. (a)	35. (b)	36. (d)	37.(a)	38. (c)	39. (a)	40. (d)