



DELHI PUBLIC SCHOOL, GANDHINAGAR
STUDENT'S BUDDY
CLASS – 1
SUBJECT – EVS
SESSION – 2026-27





DELHI PUBLIC SCHOOL, GANDHINAGAR

ACADEMIC SESSION 2026-27

SUBJECT: EVS

TERM-I (SYLLABUS)

MONTH	TOPICS	ASSESSMENT ACTIVITY
APRIL/MAY	Ch.1 About Me Ch.2 My Body Ch.3 Looking after My Body	-
JUNE	Ch.4 Clothes We Wear Ch.5 Food We Eat	-
PT-1 Syllabus Ch. 2, 3, 4		
JULY	Ch.6 Safety Rules Ch.7 My Family (Oral)	SEA-1 AIL-1
AUGUST	Ch.8 We Need Shelter Ch.9 Our Neighbourhood	CBE-1 Reflection-1
SEPTEMBER	Revision	
Half-Yearly Exam Syllabus Ch. 4, 5, 6, 8 & 9		

Topic: - About Me

Date: _____

Self Introduction

What's your name?

Hello! My name is _____.

How old are you?

I am _____ years old.

How are you?

I'm _____.

Where are you from?

I'm from _____.

Where do you live?

I live in _____.


What subject do you like?

I like _____.

What subject don't you like?

I don't like _____.

Colour the picture:



Teacher's Sign _____

DELHI PUBLIC SCHOOL, GANDHINAGAR
ACADEMIC SESSION:2026-27
WORKSHEET-2

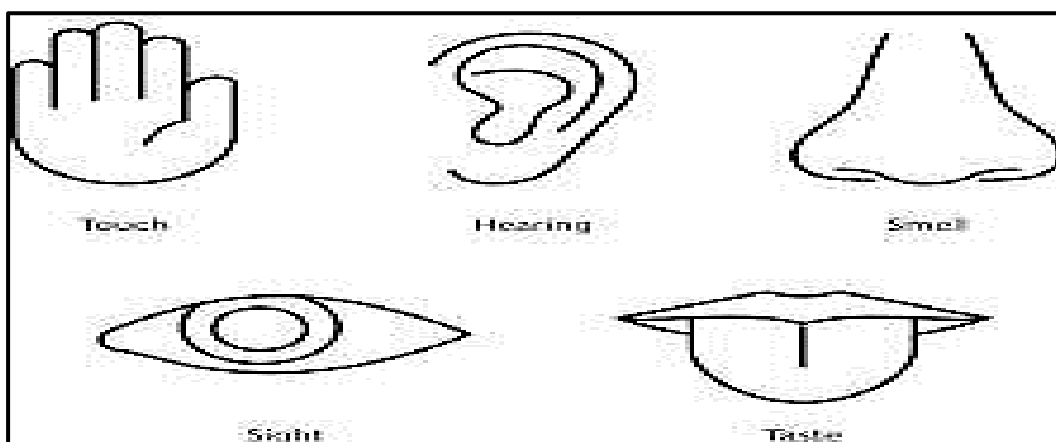
Topic: My Body

Date: _____


A. Fill in the blanks:

1. We use our nose to _____. [smell /see]
2. We use our eyes to _____. [breathe /see]
3. We use our hands to _____. [write /feel]
4. We use our mouth to _____. [run /eat]
5. We use our ears to _____. [hear /smell]

B. Colour the pictures



D. Enjoy word puzzle.



Teacher's Sign _____

DELHI PUBLIC SCHOOL, GANDHINAGAR
ACADEMIC SESSION:2026-27
WORKSHEET-3

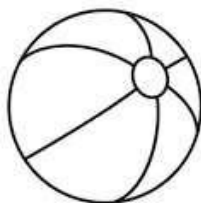
Topic: Looking After My Body

Date: _____

How do you take good care of your body parts? Draw a happy face (☺) if it shows a proper way of caring for the body. If not, draw a sad face (☹). Draw the face before each item.

- _____ 1. Wear clean and neat clothes.
- _____ 2. Eat candies and chocolates every day.
- _____ 3. Use clean handkerchief to clean the ears.
- _____ 4. Brush your teeth once a week.
- _____ 5. Read your book at bedtime using dim light.
- _____ 6. Blow your nose gently into a clean handkerchief if you have colds.
- _____ 7. Eat fruits and vegetables.
- _____ 8. Take a bath every day.

- Colour the things that help us to keep our body clean.




Teacher's Sign _____

DELHI PUBLIC SCHOOL, GANDHINAGAR
ACADEMIC SESSION:2026-27
WORKSHEET-5

Topic: Food We Eat

Date: _____

A. Fun with words



The word search puzzle consists of a 10x10 grid of letters. The words to be found are listed on the right side of the grid. The grid contains the following letters:

C	T	F	T	C	P	K	Y	K	
L	S	T	S	O	Z	T	H	L	
A	A	C	C	J	R	I	T	I	
E	F	O	C	K	E	U	L	M	
R	K	I	P	E	G	R	A	R	
E	A	O	O	J	G	F	E	S	
C	E	T	O	A	S	T	H	U	
V	R	R	L	S	V	G	B	M	
L	B	A	H	I	F	G	F	E	

The words to be found are: MILK, BREAKFAST, EGGS, CEREAL, TOAST, FRUIT, and HEALTHY.

B. Write True or False:

1. We should buy food from road vendors. _____
2. Milk is a complete food. _____
3. We have two meals a day. _____
4. Dinner is the last meal. _____

Teacher's Sign _____

DELHI PUBLIC SCHOOL, GANDHINAGAR
ACADEMIC SESSION:2026-27
WORKSHEET-6

Topic: Safety Rules

Date: _____

A. Put a tick (✓) on right picture and cross (✗) on the wrong ones in the box provided:



B. Choose the correct option.

- To cross a road, we should use the _____.
a. footpath b. road c. zebra crossing d. footboard
- We should cross the road with _____.
a. classmates b. youngers c. elders d. strangers
- We should play _____.
a. in the kitchen b. in the classroom c. on the road d. in the park

Teacher's Sign _____

DELHI PUBLIC SCHOOL, GANDHINAGAR
ACADEMIC SESSION:2026-27
WORKSHEET- 7

Topic: We Need Shelter









Date: _____

A Find the Hidden words

e	y	j	x	d	i	d	n	x	e
q	o	p	j	l	b	e	d	k	a
s	r	o	o	m	f	c	a	k	o
f	s	o	f	a	w	d	l	i	x
g	y	b	s	q	p	w	a	j	d
t	u	b	o	v	e	n	m	d	i
r	r	r	e	d	c	b	p	w	k
f	u	o	c	u	c	w	a	l	l
z	c	o	v	t	k	d	a	a	a
f	h	f	z	c	x	x	a	m	b

room
bed
roof
tub
oven
roof
sofa
lamp

B. Complete the missing letters.

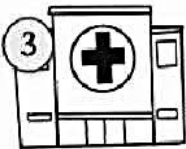

	b e <input type="text"/> r o o m	<input type="text"/> e d 
	b a <input type="text"/> <input type="text"/> r o o m	
	b a <input type="text"/> <input type="text"/> - t <input type="text"/> b	
	l i <input type="text"/> i n g - r o o m	
	s o f a	
	k i <input type="text"/> <input type="text"/> h e n	
	t a <input type="text"/> l e	

Teacher's Sign _____

Topic: Our Neighbourhood

Date: _____

1. Match the picture to the corresponding word.



park

bank

hospital

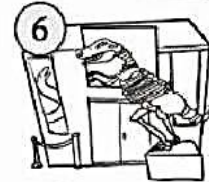
grocery store

toy store

school

library

museum



2. Write the name of the place with the help of the given words.

(library, fire station, clinic, railway station)

I go here to read books. _____

I go here to see the dentist. _____

I go here when there's a fire. _____

I go here to take a train. _____

Teacher's Sign _____

SUBJECT ENRICHMENT ACTIVITY – 1

Date: _____

A. Colour the different types of room and fill in the blanks.



1. This is the _____

Kitchen

2. This is the _____

Garage

3. This is the _____

Bedroom

4. This is the _____

Bathroom

5. This is the _____

Living room

Teacher's Sign _____

DELHI PUBLIC SCHOOL, GANDHINAGAR
ACADEMIC SESSION:2026-27

ART INTEGRATED LEARNING – 1

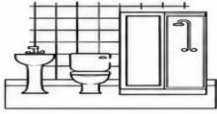





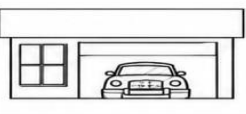



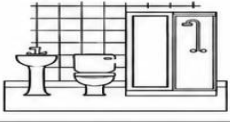




Date: _____

A. Choose the correct word from the box.

(shower, cooker, bed, clock, sofa)

1. The _____ is in the hall.
2. The _____ is in the kitchen.
3. The _____ is in the living room.
4. The _____ is in the bathroom.
5. The _____ is in the bedroom.

B. Read and Colour the correct room.

living room			
bedroom			
kitchen			
bathroom			
dining room			

Teacher's Sign _____

DELHI PUBLIC SCHOOL, GANDHINAGAR
ACADEMIC SESSION:2026-27

CBE- 1

Date: _____

A. Choose the correct answer for the following .

1. We taste ice-cream with our _____
a. tongue b. eyes c. nose
2. Drink 8 to 10 glasses of _____ every day.
a. water b. milk c. juice
3. We sleep in a _____.
a. bedroom b. table c. chair
4. Dancers and actors wear _____.
a. caps b. costumes c. uniform
5. _____ animal gives us milk.
a. cow b. horse c. tiger

B. Match the following.

- a. Helmet
- b. Kutcha house
- c. Post office
- d. Woolen clothes
- e. Always walk on

1. straw and bamboo
2. two wheelers
3. pavement
4. stamps and postcard
5. winter season

C. Write True or False.

1. We go to school to learn and study. _____
2. We feel things with our skin. _____
3. Nose helps us to smell. _____

Teacher's Sign_____

DELHI PUBLIC SCHOOL, GANDHINAGAR

ACADEMIC SESSION:2026-27

REFLECTION- 1

Date: _____

Circle the correct answer:

A. Choose the correct option for the following.

1. A day we are born is called hobby / birthday.
2. We write and eat with our hands / legs.
3. We wear cotton clothes in summer / winter.
4. A soldier wear a uniform / costume.
5. We take rest and sleep in the bathroom /bedroom.

B. Write true or false.

1. We take a bath once a month. _____
2. It is not important to wear a seat belt while driving car. _____
3. To stay fit we should do yoga and exercises every day. _____
4. A nurse and doctor wear uniform. _____
5. Houses in hot places have flat roofs. _____

C. Draw, name and colour.

Rainy season



Summer season



Teacher's Sign _____


DELHI PUBLIC SCHOOL, GANDHINAGAR
ACADEMIC SESSION:2026-27
CASE STUDY

Date: _____

Case Study-I : Read the paragraph carefully and answer the question

“We use some parts of our body to know about things around us. They are eyes, ears, nose, skin and tongue. These parts are called sense organs.”

1. Look at the picture and identify the sense organ Riya is using to smell the flower.



(a)



(b)



(c)



Case Study-II : Read the paragraph carefully and answer the question

2. “Shyam does many activities in his day to day life. He tries to follow the safety rules but sometimes he forgets them.”



- a) Identify and cross the activities in the above picture in which he is not following the safety rules.

- b) Which beginner friendly safety rule is Shyam following while swimming?

- i. Going into deep water ii. Using swimming tube iii. Pushing others into the water.



Delhi Public School, Gandhinagar
Model Periodic Test Paper-I (2026-27)

Class I

EVS

Date:

Time: 1 hour

M. Marks: 00

Name: _____ **Sec:** _____ **Roll No.:** _____

General Instructions:

- i. All the questions are compulsory.
- ii. Answer the question as per the instructions.

Q.I Choose the correct option:

1. Pari likes to read a story book in her free time. It is her _____.
a) hobby b) park c) birthday
2. Ram's teacher has given him homework to write about himself. He will use his _____ to write it.



a)



b)



c)

3. We should drink at least _____ glasses of water daily.
a) 2 to 3 b) 6 to 8 c) 14 to 18
4. On a hot summer day, we should wear _____ clothes.
a) raincoat b) woollen c) cotton
5. It was the annual function of DPSG, and all the students of class 1 wore _____ for the dance performance.
a) costume b) uniform c) gloves



6. Ali wants to deliver a speech in the class. He will speak with

his _____.

a) legs

b) head

c) mouth

7. Playing _____ games keeps our body and mind active.

a) indoor

b) outdoor

c) online

8. Clothes like shawls, sweaters and jackets are made up of _____.

a) wool

b) cotton


c) leaves



Q.II Case Study

“We get wool from the fur on the body of animals like rabbit, sheep and yak. Wool is used to make clothes like sweaters, shawls, jackets and mufflers.”

Tick the type of clothes that Ram should wear to keep his body warm during winter season



(a)

(b)

(c)

Q.III A Fill in the blanks with the help of words given in the bracket:

a) We should drink _____ (clean/dirty) water.

b) We all have _____ (same/different) fingerprints.

c) We all are _____ (special/simple).

d) We should _____ (watch TV/ exercise) everyday to stay fit.

B. Write T for True and F for False:

a) Everyone is unique. _____


b) We should trim our nails regularly. _____

c) Nose helps us to eat. _____

d) We must wash our hands before and after having meals. _____

C. Match the following:

- a) tongue ()
- b) smell ()
- c) ears ()
- d) birthday ()



Q. IV Give two examples:

1. Which parts of the body are used to carry and push things?

Ans. a) _____ b) _____

2. Things we use in rainy season.

Ans. a) _____ b) _____

Q.V Draw, name and colour the following:

a) A body part that helps us to walk.



b) A body part that helps us smell.



Q.VI Unscramble the letters to name the picture.



s i m w
 [] [] [] []



m t o h u
 [] [] [] [] []



w l o o
 [] [] [] []



s r h i t
 [] [] [] [] []



Delhi Public School, Gandhinagar
Model Half Yearly Paper (2026-27)

Class :I

EVS

Date:

Time: 2 hours

M. Marks: 00






Name: _____ **Sec:** _____ **Roll No:** _____




General Instructions:

i) All the questions are compulsory.

ii) Answer the questions as per given instructions

Q.I Choose the correct answer.

1. Ram wants to buy a pencil, he will go to _____.
a. market b. post office c. park 
2. Radha is going back home from school, she should not leave the school with _____.
a. mother b. stranger c. father
3. Samay is not feeling well, he should go to the _____.
a.  b. c.  
4. We get _____ from plants and animals.
a. food b. water c. home
5. _____ means staying safe from getting hurt.
a. safety b. traffic c. kitchen
6. Summi is hungry in the evening, the snacks we eat in the evening are called _____.
a. breakfast b. supper c. lunch
7. Reena needs money, she will go to a _____ to withdraw it. 
a. bank b. market c. temple
8. Rama is helping her mother in the kitchen, she should not play with _____.
a. knives b. soft toys c. books
9. Rahul is crossing the road, he will cross the road at _____.
a. park b. zebra crossing c. church


10. Food gives us _____.
 a. energy b. cloth c. air
11. Rani will carry _____ while swimming. 
 a. bucket b. tube c. pipe
12. Rani and Beena want to play, they will go to the _____ to play. 
 a. post office b. hospital c. park
13. While coming in the school bus we should not disturb the _____.
 a. driver b. gardener c. carpenter
14. Anvi has given me a gift, I will say _____ to her. 
 a. thank you b. sorry c. please
15. Nidhi wants to take an auto, she will go to _____.
 a. auto stand b. flat c. pavement
16. Meena will have her _____ before going to school.
 a. breakfast b. lunch c. dinner

Q. II Case Study

1. "A good house is neat and clean. It has dustbins to throw waste. It has many doors and windows to let the in sunlight and fresh air. It has lots of plant."

Identify and tick the picture of a good house and cross out the other one.

(a)



(b)



2. "There are some food items made of milk. They are called milk products. Curd, butter, cheese, ghee are some milk products."

Which milk product can be spread on bread?

Ans. _____

Q. III Fill in the blanks with the help of the words given below:





clean pavement healthy meals brunch neighbourhood

- a. The place around our house is called _____.
- b. We eat our _____ in the dining room.
- c. A meal between breakfast and lunch is called _____.
- d. We should keep our neighbourhood _____.
- e. We should eat _____ food.
- f. We should always walk on the _____.

Q.IV Write T for true statements and F for the false:

- a. We go to the restaurant to play. _____
- b. We should get into moving vehicle. _____
- c. We eat dinner in the morning. _____
- d. We go to school to study. _____
- e. We need food to grow. _____
- f. We get stamps and envelopes from bank. _____

Q. V Identify and write the name of the given pictures:

fish	egg	church	school
			

Q.VI Give two examples:

- a. Name the places to follow the safety rules.





- b. Animals that give us milk.

- c. Places in our neighbourhood.

Q.VII Answer in one word:

- a. A meal that we take in the night. _____
- b. A place where we study and learn new things. _____

Q.VIII Unscramble the following words:

- c. Tmepel- _____  c. Mnaog- _____ 
- d. Mlki- _____  d. Bnak- _____ 

Q. IX Circle the correct answer:

- a. We go to _____ (school/ bus stop) to take a bus.
- b. Do not _____ (fight/play) with other children.

Q. X Answer the following questions:

a. Why do we need food?

Ans. We need food to ____, stay healthy and to get _____ to work and play.

b. Name any two places of worship in your neighbourhood.

Ans. The two places of worship are _____ and _____.

Q.XI Draw name and colour:

Traffic light



DELHI PUBLIC SCHOOL, GANDHINAGAR
STUDENT'S BUDDY
CLASS - 1
SUBJECT - EVS
SESSION - 2026-27



DELHI PUBLIC SCHOOL, GANDHINAGAR

ACADEMIC SESSION 2026-27

SUBJECT: EVS

TERM-II (SYLLABUS)

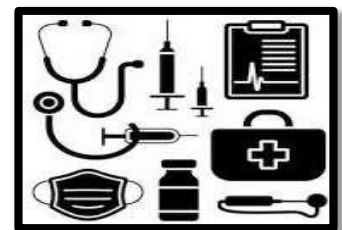
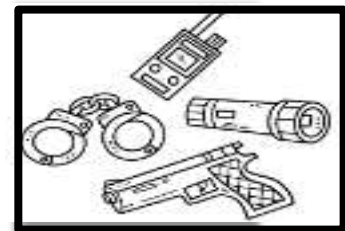


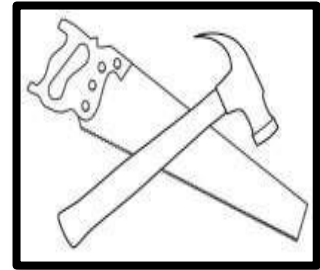

MONTH	TOPICS	ASSESSMENT ACTIVITY
OCTOBER	Ch.10 My School Ch.11 People Who Help Us	AIL-2
NOVEMBER	Ch.12 Festivals We Celebrate Ch.13 Travelling Is Fun	SEA-2
PT-II Syllabus Ch. 10, 11, 12 & 13		
DECEMBER	Ch.14 The World of Plants Ch.15 The World of animals	CBE-2
JANUARY	Ch. 16 Water and Air Ch.17 Weather	Reflection-2
FEBRUARY	Ch.18 In the Sky	
Annual Exam Syllabus Ch. 14, 15, 16, 17 & 18		

DELHI PUBLIC SCHOOL, GANDHINAGAR
ACADEMIC SESSION:2026-27
WORKSHEET- 1

Topic: People Who Help Us

Date: _____

Q.1 Match the following:



Q1. Fill in the blanks:

1. A _____ makes furniture for us.

2. A _____ brings letters and parcels.

3. A _____ catches thieves.

4. A _____ mends our shoes.

5. A _____ delivers milk to us.



Q.2 Colour and name the following helpers.





Teacher's Sign _____

DELHI PUBLIC SCHOOL, GANDHINAGAR
ACADEMIC SESSION:2026-27
WORKSHEET- 2

Topic: My School

Date:_____

A. Choose the correct answer.

1. In school we learn to ____
a) read and write b) paint and draw c) all of these
2. The one who teaches in the classroom is a _____
a) teacher b) nurse c) guardian
3. School dress is known as _____
a) costumes b) uniforms c) special clothes
4. Teachers sit here and do their work.
a) library b) staffroom c) playground
5. The Principal sits in the _____
a) Assembly hall b) infirmary c) principal's office

B. Match the following.

A	B
1) Peon	a) keeps the school clean
2) Guard	b) takes decisions
3) Sweeper	c) guards the school
4) Teacher	d) types letters
5) Headmistress	e) lends books to read
6) Clerk	d) teaches and guides us
7) Librarian	e) rings the bell, carries messages

Teacher's Sign_____

DELHI PUBLIC SCHOOL, GANDHINAGAR
ACADEMIC SESSION:2026-27
WORKSHEET- 3

Topic: Festivals We Celebrate

Date:_____

Q.1 Fill in the blanks with the help of the given words.

25th December	Republic Day Diwali	Festivals Gurpurab
---------------------------------	--------------------------------------	-------------------------------------

1. _____ are the special days
2. Lord Jesus Christ was born on _____.
3. We celebrate _____ on 26th January.
4. On _____, people go to gurudwara with their families.
5. _____ is the festival of light.

Q.2 Write True or False.

1. Gandhi Jayanti is celebrated on 2nd October.
2. Holi is the festival of colours.
3. Langar is a free meal served in church.

Q.3 Name the festival and colour the pictures.



--	--	--

Teacher's Sign_____

DELHI PUBLIC SCHOOL, GANDHINAGAR

ACADEMIC SESSION:2026-27

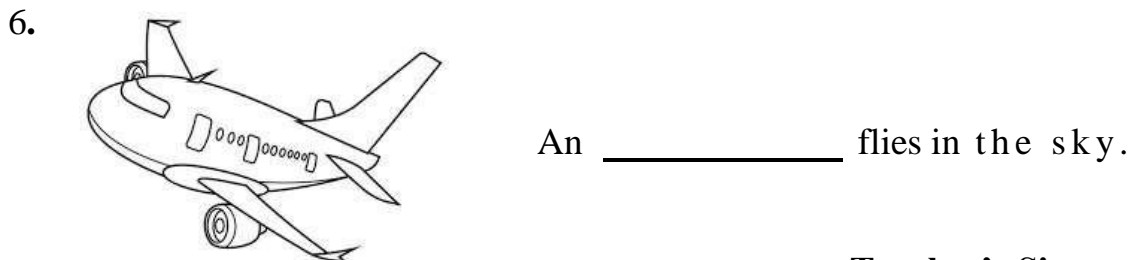
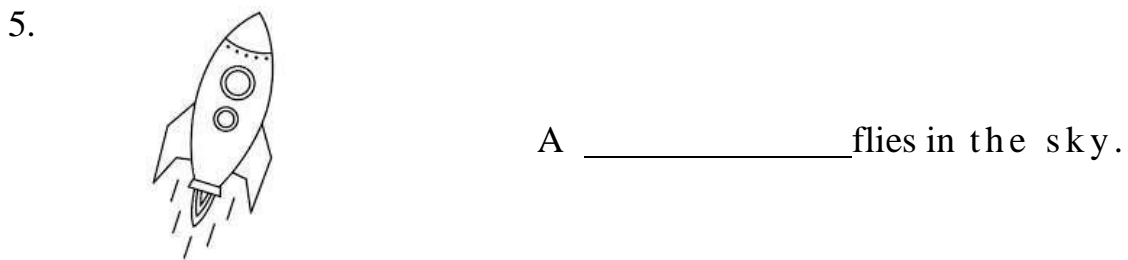
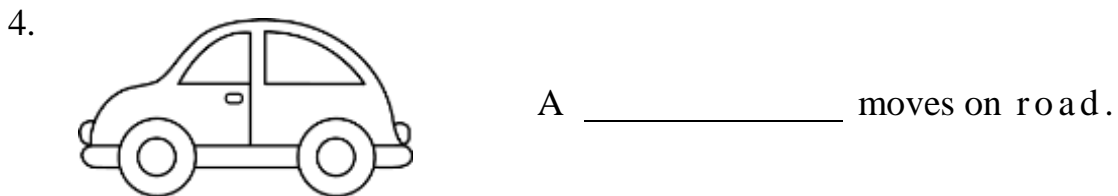
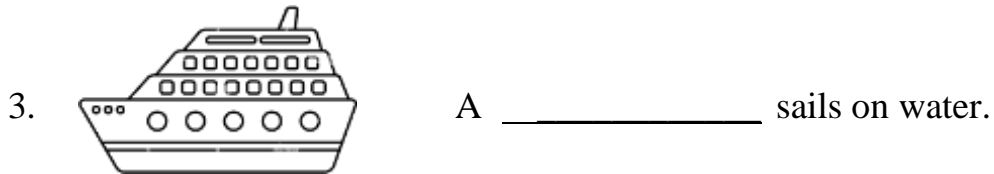
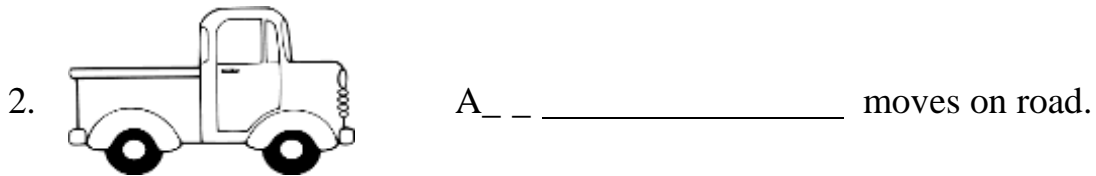
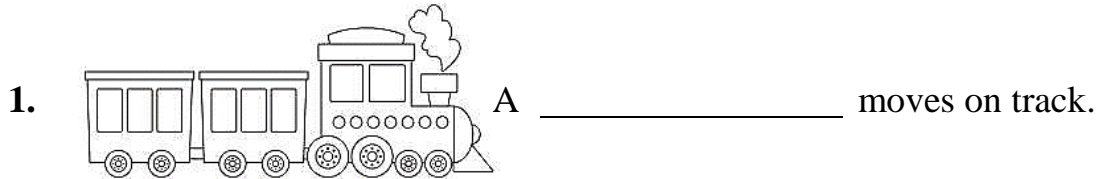
WORKSHEET- 4

Topic: Travelling Is Fun

Date:_____

Q.1 Colour the pictures and use the key words given below to complete the sentences.

train	car	truck	rocket	ship	aeroplane
-------	-----	-------	--------	------	-----------



Teacher's Sign _____

DELHI PUBLIC SCHOOL, GANDHINAGAR
ACADEMIC SESSION:2026-27
WORKSHEET- 5

Topic: The World of Plants

Date: _____

Q.1 Fill in the blanks with the help of word bank given below.

food	leaves	sunlight	support	sizes
------	--------	----------	---------	-------

1. Stem helps to _____ the plant and keep it upright.
2. Leaves are very important as they make _____ for the plant.
3. _____ catches the sunlight and make food for the plant.
4. Plants need _____ to make food.
5. Leaves come in all different shapes and _____.

Q.2 Answer in one word.

1. What are the plants which grow along the ground called?

Ans. _____

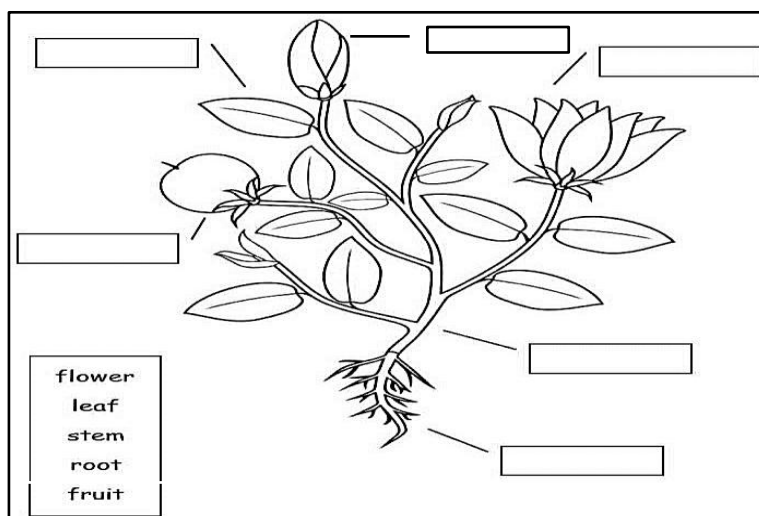
2. Which part of the plant is called the kitchen of the plant?

Ans. _____

3. What are small plants with woody stems called?

Ans. _____

Q. 3 Label the parts of the plant and colour it.



Teacher's Sign _____

DELHI PUBLIC SCHOOL, GANDHINAGAR
ACADEMIC SESSION:2026-27
WORKSHEET- 6


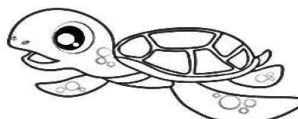
Topic: The World of Animals

Date: _____

Q.1 Fill in the blanks with the help of the word bank given below.
 (frog, emu, blue whale, beak, honey)

1. _____ can live on land as well as in water.
2. Birds eat with their _____.
3. _____ is a flightless bird.
4. _____ is the largest animal on the earth.

Q. 2 Classify the animals and write in the correct column.



farm	pet	wild	water

Q.3 Complete the following sentences using the given words.

coop kennel nest tree forest

1. An elephant lives in a _____.
2. A monkey lives on a _____.
3. A bird lives in a _____.
4. A dog lives in a _____.
5. A hen lives in a _____.



Teacher's Sign _____

DELHI PUBLIC SCHOOL, GANDHINAGAR
ACADEMIC SESSION:2026-27
WORKSHEET- 7

Topic: Water and Air

Date: _____

A. Choose the correct answer.

1. From which of these do we get water?
a. lake b. river c. both
2. All the living things require _____.
a. ice cream b. water c. pizza
3. Which of these can be used to store water?
a. pen b. water tank c. plate

B. Match the following.

A



B


washing

drinking

cooking

planting

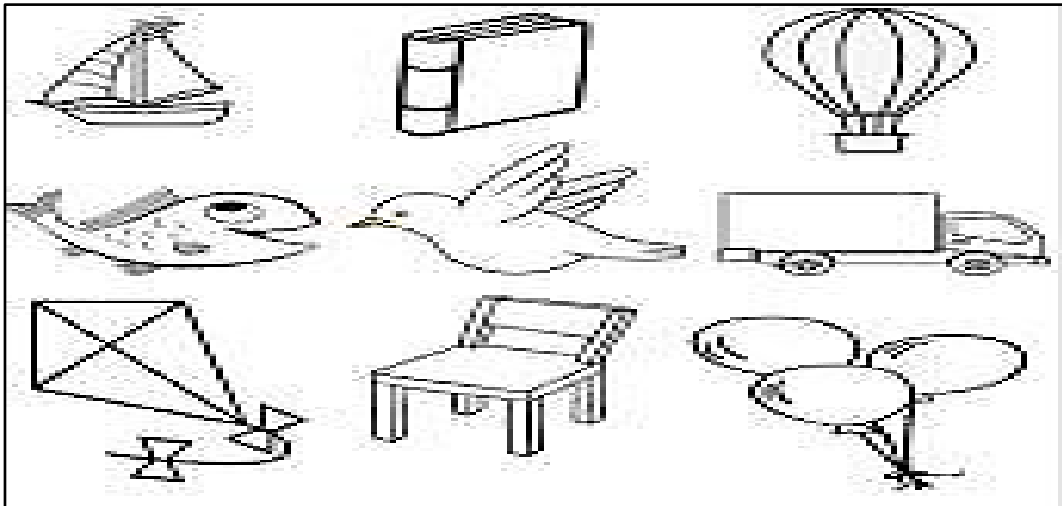
C. Colour the different sources of water.



D. Help Hydro to turn off the tap.



E. Colour the things that use air.



F. Give two examples.

1. Things that make air dirty.

--	--

2. Properties of air.

--	--

3. Things that move by air.

--	--

Teacher's Sign _____

DELHI PUBLIC SCHOOL, GANDHINAGAR

ACADEMIC SESSION:2026-27

WORKSHEET- 8

Topic: Weather

Date: _____

Q.1 Write T for true and F for false for the following statements.

1. Weather always remains the same.
2. We wear woollen clothes during summer season.
3. We sit near fire in winters.
4. The sun shines brightly on a sunny day.

Q.2 Match the columns to complete the sentences.

Column A

- a) Summer days are
- b) Winter days are
- c) A strong wind blows on
- d) Monsoon season brings

Column B

- 1) cold
- 2) a windy day
- 3) rain
- 4) hot

Q.3 Answer the following questions.

1. What type of clothes do we wear in winter season?

Ans. _____.

2. What do we like to drink on a hot day?

Ans. _____.

3. What do you see on a rainy day?

Ans. _____.

Q.4 Draw the following.

--	--

Day Sky

Night Sky

Teacher's Sign _____

DELHI PUBLIC SCHOOL, GANDHINAGAR
ACADEMIC SESSION:2026-27
WORKSHEET- 9

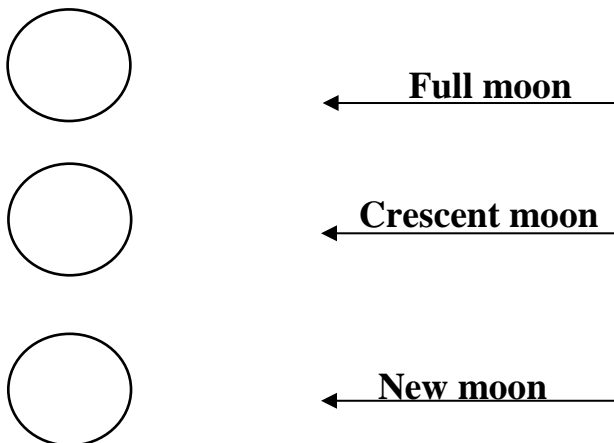
Topic: In The Sky

Date: _____

Q.1 Write T for true and F for false for the following statements.

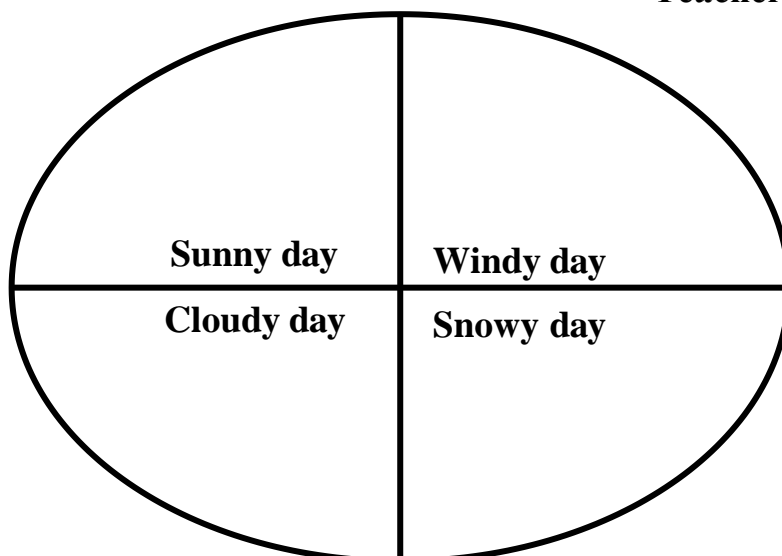
1. The Moon is not as hot and big as the Sun. _____
2. Stars look small because they are far away from us. _____
3. A rainbow is a band of eight colours. _____
4. We can count the stars in the sky. _____

Q.2 Shade the moon according to the different phases given below.



Q.1 Read and draw the following.

Teacher's Sign _____




SUBJECT ENRICHMENT ACTIVITY – 2

Date: _____

A. Classify the vehicle and write in the correct column.

(parachute, ship, helicopter, car, cycle, boat, aeroplane, bus)



Air transport	Water transport	Land transport

B. Find the words in the crossword for the pictures given below.



Teacher's Sign _____

DELHI PUBLIC SCHOOL, GANDHINAGAR
ACADEMIC SESSION:2026-27


ART INTEGRATED LEARNING – 2

Date: _____

A. Match the Room with the Activity.

Room	Activity
a. Library	studying
b. Classroom	singing
c. Music room	reading books
d. Computer room	playing
e. Playground	using computer

B. Draw the missing items in the classroom and colour the picture.



Teacher's Sign _____

DELHI PUBLIC SCHOOL, GANDHINAGAR
ACADEMIC SESSION:2026-27

CBE – 2

Date _____

Q.1 Choose the correct option.

1. We sit and read books in the _____.
a) music room b) library c) canteen
2. Who protects our country from enemies?
a) postman b) gardener c) soldier
3. On Eid ul-Fitr, people wish each other _____.
a) Eid Mubarak b) Happy Diwali c) Merry Christmas
4. Astronauts use _____ to go into space.
a) truck b) ship c) rocket
5. Choose an example for climber.
a) grass b) grapevine c) pumpkin

Q.2 Fill in the blanks with the correct words.

1. Tiny animals with six legs are called _____. (insects/pets)
2. We use _____ (tiger/donkey) to carry our things.
3. _____ (lake/ocean) is the largest water body.
4. Drinking dirty water can make us _____. (healthy/sick)

Q.3 Write True/False

1. Air makes parachutes and kites fly.
2. The Sun shines brightly on a rainy day.
3. Plant make their own food with the help of sunlight.
4. The different shapes of the Moon are called phases of the Moon.

Teacher's Sign _____

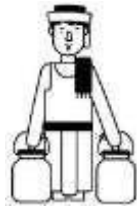
DELHI PUBLIC SCHOOL, GANDHINAGAR
ACADEMIC SESSION:2026-27

REFLECTION – 2

Date _____

Q.1 Match the following.

1.



a) Climber

2.



b) Milkman delivers milk
Milkman delivers milk.

3.



c) Holi is the festival of colours.

4.



d) Air is needed for burning.

5.




e) Cat is an example of domestic animal.

Q.2 Identify the picture and write the name.

truck

rainy day

library



--	--	--

Teacher's Sign _____

Case Study-I : Read the paragraph carefully and answer the question:

To keep our school neat and clean, we should not write on the chairs, desks, walls and doors. We must always throw garbage in the dustbins. We should plant trees to make it green and beautiful.

1. We must throw the garbage in –

(a)



(b)



2. Riya is lighting diyas with her mother and decorated their house beautifully with rangoli.

i) Which festival is this?

a) Holi

b) Diwali

c) Eid

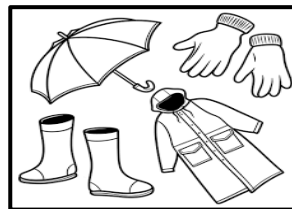


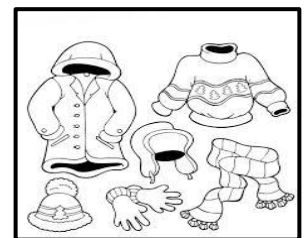
Case Study-II: Read the paragraph carefully and answer the question:

The condition of air keeps on changing every day. This is called weather. The sun shines brightly on sunny day. We wear cotton clothes to keep us cool.

Look at the pictures of different types of things and clothes and identify the weather.









Delhi Public School, Gandhinagar
Model Periodic Test paper -II (2026-27)

Class : I

Environmental Science

Date:

Time: 1 hour

M. Marks: 00

Name:




Sec:

Roll No:

General Instructions:

- (i) All the questions are compulsory.
(ii) Answer the question as per the instructions

Q. I Choose the correct answer from the given options.

- Priya wants to get the leaking tap repaired. So, she will call a
a. doctor b. mason c. plumber
- A _____ teaches in school.
a. fireman b. teacher c. doctor
- On which festival do people make sewain?
a. Holi b. Eid-ul-fitr c. Diwali
- Santa Claus brings gift for children on _____.
a. Christmas b. Holi 
c. Eid
- A _____ has six wheels.
a. bus b. bicycle 
c. boat
- Identify the means of water transport.
a. car b. ship 
c. train
- Siya's shoe is broken. So, she will go to a _____ to get it repaired.
a. cobbler b. mason c. tailor
- _____ is celebrated on 26th January every year.
a. Diwali b. Republic Day c. Holi

Q.II Case Study: Read the paragraph carefully and answer the question:

“We travel to different places using different means of transport. They help us to reach various places faster. These vehicles help us to travel on land, on water and in the air.”

“Aman and his friends are going to school. They go to school by bus every day.”

1) Which mode of transport do they use?

a) water

b) air

c) land

Q.III Fill in the blanks with the help of given options.

gurdwara tonga car mosque tailor milkman

1. A _____ stitches our clothes.
2. A _____ delivers milk to your house.
3. We go to the _____ to offer namaz.
4. Langar is a free meal served in a _____.
5. A _____ is a mode of land transport.
6. A _____ is pulled by animals.

Q.IV Write T for true statement and F for false one.

- a. A postman delivers letters. _____
- b. A carpenter sells vegetables. _____
- c. Diwali is the festival of lights. _____
- d. We decorate mango tree on 25th December. _____

Q.V Give two examples.

- a. Things used to decorate during Diwali.

Ans. a. _____ b. _____

- b. Any two means of land transport.

Ans. a. _____ b. _____

Q.VI Answer the following questions.

- a. What do people do on Diwali?

Ans. _____

b. How do we travel to different places?



Ans.

Q.VII

Draw, name and colour.

Means of air transport.



8. Which of the following is not a water body?
a) sea b) river c) mountain
9. Naina wants to grow a plant. What should she give the plant regularly to help it grow well?
a) water b) candle c) book
10. We cannot drink sea water because it is _____.
a) sweet b) bitter c) salty
11. Why do we need air?
a) to write b) to breathe c) to bathe
12. Shilpa is filling air in a balloon. What will get changed in the balloon?
a) colour of a balloon b) size of a balloon c) None of these
13. Which musical instrument can be played with the help of air?
a) tabla b) flute c) violin
- 
14. Sam wants to fly a kite. What will help his kite to fly?
a) fire b) water c) air
15. Anaya is going out in rainy season. What should she carry with her to protect herself from rain?
a) comb b) umbrella c) jacket
16. Meeta feels very hot during the summer season. Which season is best for wearing cotton clothes?
a) Summer b) rainy c) winter
- 

Q.II Case Study: Read the paragraph carefully and answer the question:

“Maya went to the park with her teacher. They did many fun activities about air. They learnt that air is all around us. We cannot see it, but we can feel it. Air helps us to blow things, fly kites, inflate balloons etc. Air is also very important for all the living things.”

1. Tick the thing that we cannot see.
(a) balloon (b) air (c) kite

2. Tick the activity that needs air.
 (a) flying a kite (b) sleeping (c) wearing shoes
3. Which one can move because of air?
 (a) dry leaves (b) wall (c) cupboard
4. Air helps bird to _____.
 (a) swim (b) fly (c) crawl

Q. III Fill in the blanks with the help of words given below.



trunk	clean	climbers	insects	Stars	windy
--------------	--------------	-----------------	----------------	--------------	--------------

1. The plants having weak stems that take support to climb are called _____.
2. Tiny animals with six legs are called _____.
3. _____ water has no colour, taste or smell.
4. Branches of a tree move on a _____ day.
5. _____ are not visible during the day time.
6. A tree has a thick and strong stem called a _____.

Q.IV Write (T) for true statements and (F) for false ones.

1. Animals that live in forests are known as wild animals. _____
2. The roots of the plants are above the ground. _____
3. When wind moves slowly it causes storm. _____
4. The weather is very hot on a chilly day. _____
5. Water should be boiled and filtered before drinking. _____
6. All plants need light and warmth of the sun to live. _____

Q. V Identify the picture and write the name.

1.  _____	2.  _____
---	--

Q. VI Give two examples.

- Water bodies
a. _____ b. _____
- Herbs
a. _____ b. _____
- Things that plants need to grow
a. _____ b. _____





Q. VII Answer in one word.

summer	wind	trees
---------------	-------------	--------------

- Very big and strong plants having thick and strong stem.

- Season in which people enjoy going for swimming. _____
- What is moving air called? _____

Q. VIII Unscramble the following words.

1. tna _____		2. oomn _____	
3. silaboat _____		4. ruckt _____	

Q. IX Circle the correct answer.

1. An elephant is a **big** / **small** animal.
2. Dark clouds hide the sun on a **cloudy** / **chilly** day.

Q. X Answer the following questions.

1. What are herbs?

Ans.

2. How is the weather after rain?

Ans.

Q.XI Draw, name and colour.

1. A thing that moves with the help of air.	2. Food from plants.(Any one)