



**Delhi Public School Gandhinagar**  
**Academic Session 2026-27**  
**Maths Aptitude Test -Answer Key**  
**CLASS 1**

<b>Student Name:</b>		
<b>Total Questions: 20</b>	<b>Guidelines for the Candidate</b>	<b>Time : 1 hr.</b>
1.	Additional 10 minutes will be given to the students to fill up the students' information before the start of the exam.	
2.	All questions are compulsory. There is no negative marking. Use of calculator is not permitted.	
3.	Write your Roll no, Name and Class clearly on the answer sheet and do not forget to sign.	
4.	There is only one correct answer hence mark one choice only.	
5.	Darken your choice with HB pencil or Blue/Black ball point pen.	
6.	Rough work should be done in the blank space provided in the booklet.	
7.	Return the answer sheet to the invigilator at the end of the exam. The question paper can be retained by the student.	

**Tick the correct answer.**

**1. Which of the following look like a cone?**

a. ✓



b.



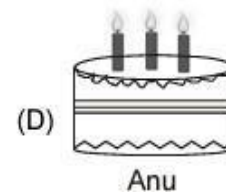
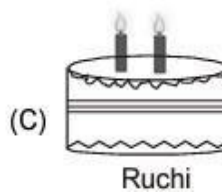
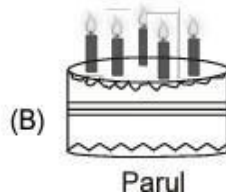
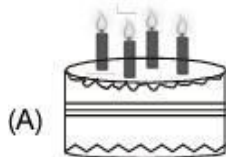
c.



d.




**2. Four friends are celebrating their birthdays. The candles on cake show their ages. Who is the youngest?**



3. Which shape can be joined with the given shape to make a circle?



4. Arrange these trees in increasing order of their heights:



a.  $P > Q > R > S$

b.  $Q > P > R > S$

✓ c.  $Q < P < R < S$

d.  $Q < R < P < S$

5. There are 3 stars on a flag. There are 7 such flags. How many stars are there altogether ?



a. 20

✓ b. 21

c. 28

d. 27

6. Raju has following cars and vans. Which statement is true?



a. Cars are more than vans

b. Vans are less than cars.

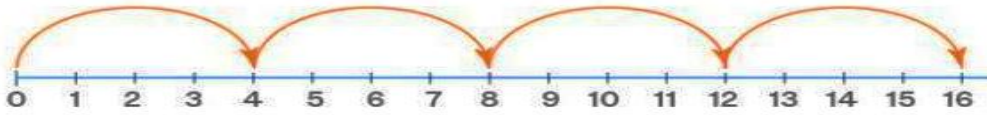
c. ✓ Cars are equal to vans.

d. There are 9 vans

7. Mahi has 4 books. Ridhima has 20 books. Sarika has 2 books. How many books do they have altogether?

- a. 24      ✓ b. 26      c. 20      d. 22

8. The given number line shows \_\_\_\_\_



- a. Counting by 2's      b. Counting by 3's  
c. Counting by 5's      ✓ d. Counting by 4's


9. Which of the following is correct subtraction statement for the given picture?



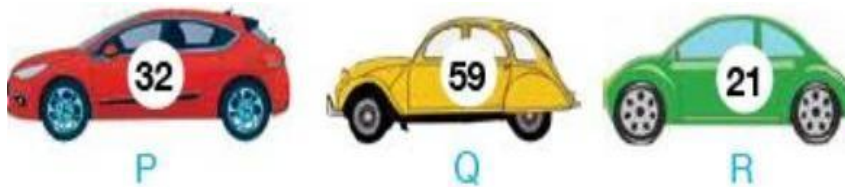
- ✓ a. 8-3      b. 5-3      c. 4-3      d. 9-5

10. The length of the ladder is \_\_\_\_\_.

- a. 5      ✓ b. 10      c. 12      d. 14



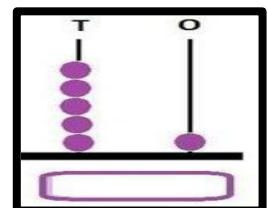
11. Which of the following cars show the greatest number?



- a. P      ✓ b. Q      c. R      d. Can't try

12. What number does the abacus show?

- a. 45      b. 54      c. 15      ✓ d. 51



13. What do you think the clock shows when it's time for bed?



- a. 3 am      b. 11 am      ✓ c. 10 pm      d. 5 pm

14. Sony weighs 5 kg less than her brother, Albert. If Albert's weight is 30 kg, what is Sony's weight?

- a. 36 kg.      ✓ b. 25 kg.      c. 50 kg.      d. 22 kg.

15. Which of the following shows the object which can hold maximum amount of water?



16. Find the total amount shown below.



- ✓ a. 33      b. 43      c. 23      d. 63

17. Dora was solving number patterns. Fill in the missing numbers.



- a. 8, 9      b. 9, 10      ✓ c. 9, 11      d. 8, 10

18. How many triangles are there in the given picture?

- ✓ a. 5      b. 4      c. 3      d. 2



19. The weight of kids is given below. Identify the heaviest kid.

Ankur



33 kg

Kareem



22 kg

Harsh



30 kg

Raj



24 kg

- a. Raj      b. Kareem      c. Ankur      d. Harsh

20. A whiteboard is 15 feet long. If you divide it into 5 equal parts, what is the length of each part?

- a. 2 feet      b. 4 feet      c. 5 feet       d. 3 feet

