

Table of 2 and 5

NOTEBOOK EXERCISE

Classwork



2	×	1	=	.	2
2	×	2	=	.	4
2	×	3	=	.	6
2	×	4	=	.	8
2	×	5	=	1	0
2	×	6	=	1	2
2	×	7	=	1	4
2	×	8	=	1	6
2	×	9	=	1	8
2	×	10	=	2	0

5	×	1	=	.	5
5	×	2	=	1	0
5	×	3	=	1	5
5	×	4	=	2	0
5	×	5	=	2	5
5	×	6	=	3	0
5	×	7	=	3	5
5	×	8	=	4	0
5	×	9	=	4	5
5	×	10	=	5	0



L-1 2-DIGIT NUMBERS

NOTEBOOK EXERCISE

Classwork

Ex-1 Write number names.

Sr.no	Number	Number names
1.	10	Ten
2.	20	Twenty
3.	30	Thirty
4.	40	Forty
5.	50	Fifty
6.	60	Sixty
7.	70	Seventy
8.	80	Eighty
9.	90	Ninety
10.	100	Hundred



 Classwork**Ex-2 Fill in the with number names.**

Sr.no	Number	Number names
1.	<u>53</u>	Fifty-three
2.	42	<u>Forty-two</u>
3.	86	<u>Eighty-six</u>
4.	<u>91</u>	Ninety-one
5.	<u>31</u>	Thirty-nine

 Practice work

Sr.no	Number	Number names
1.	<u>76</u>	Seventy-six
2.	64	<u>Sixty-four</u>
3.	<u>38</u>	Thirty-eight
4.	26	<u>Twenty-six</u>

 Classwork**Ex-3 Write the expanded form:-**

Sr.no	Standard Form	Expanded Form (Tens + Ones)
1.	69	6 tens + 9 ones or 60 + 9
2.	44	4 tens + 4 ones or 40 + 4
3.	23	2 tens + 3 ones or 20 + 3
4.	78	7 tens + 8 ones or 70 + 8

 Practice work

Sr.no	Standard Form	Expanded Form (Tens + Ones)
1.	27	2 tens + 7 ones or 20 + 7
2.	56	5 tens + 6 ones or 50 + 6
3.	83	8 tens + 3 ones or 80 + 3

 Classwork

Ex-4 Write the place value and face value of the underlined digit :-

Sr.no	Number	Place value	Face value
1.	4 <u>6</u>	6 ones or 6	6
2.	<u>7</u> 2	7 tens or 70	7
3.	<u>2</u> 8	2 tens or 20	2
4.	5 <u>9</u>	9 ones or 9	9

 Practice work

Sr.no	Number	Place value	Face value
1.	1 <u>2</u>	2 ones or 2	2
2.	<u>9</u> 8	9 tens or 90	9
3.	<u>8</u> 9	8 tens or 80	8

Classwork

Ex-5 Write Before, After and Between numbers (mixed practice):-

Sr.no	Before number	Between number	After number
1.	38	<u>39</u>	40
2.	29	<u>30</u>	31
3.	<u>41</u>	42	43
4.	<u>54</u>	55	56
5.	19	20	<u>21</u>
6.	97	98	<u>99</u>




Practice work


Sr.no	Before number	Between number	After number
1.	18	<u>19</u>	20
2.	32	33	<u>34</u>
3.	<u>91</u>	92	93

Classwork

Ex-6 Arrange the numbers in Ascending order:-

1.	43	62	12	24
Ans.	12	24	43	62
2.	71	32	56	88
Ans.	32	56	71	88
3.	38	37	35	39
Ans.	35	37	38	39



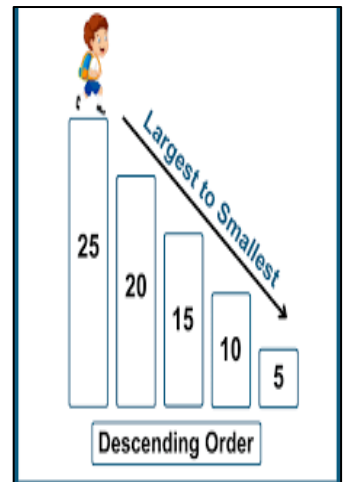
 Practice work

1.	98	38	61	34
<i>Ans.</i>	<i>34</i>	<i>38</i>	<i>61</i>	<i>98</i>
2.	68	44	23	72
<i>Ans.</i>	<i>23</i>	<i>44</i>	<i>68</i>	<i>72</i>

 Classwork

Ex-7 Arrange the numbers in Descending order:-

1.	76	89	45	32
<i>Ans.</i>	<i>89</i>	<i>76</i>	<i>45</i>	<i>32</i>
2.	25	95	5	15
<i>Ans.</i>	<i>95</i>	<i>25</i>	<i>15</i>	<i>5</i>
3.	18	20	11	29
<i>Ans.</i>	<i>29</i>	<i>20</i>	<i>18</i>	<i>11</i>



 Practice work

1.	15	18	11	14
<i>Ans.</i>	<i>18</i>	<i>15</i>	<i>14</i>	<i>11</i>
2.	53	10	31	77
<i>Ans.</i>	<i>77</i>	<i>53</i>	<i>31</i>	<i>10</i>

Classwork

Ex-8 Write the Ordinal Numbers:-


1 st	First
2 nd	Second
3 rd	Third
4 th	Fourth
5 th	Fifth
6 th	Sixth
7 th	Seventh
8 th	Eighth
9 th	Ninth
10 th	Tenth



Ex-9 Write the Position and draw it:-

1. U is at the **Second** position.
2. S is at the **First** position.
3. N is at the **Third** position.

Ans. SUN



Ex-10 Write the numbers in the correct column:-

21	66	30	47	52	73
----	----	----	----	----	----

Odd Numbers	Even Numbers
21	66
47	30
73	52

Ex-11 CBE Written:-

Q. Who am I?

a. Smallest 2- digit number.

Ans. 10

b. Greatest 2- digit number.

Ans. 99

Ex-12 CBE Oral:-

1. You are standing on step **14**. If you climb up one more step, what number are you on now?

Ans. 15

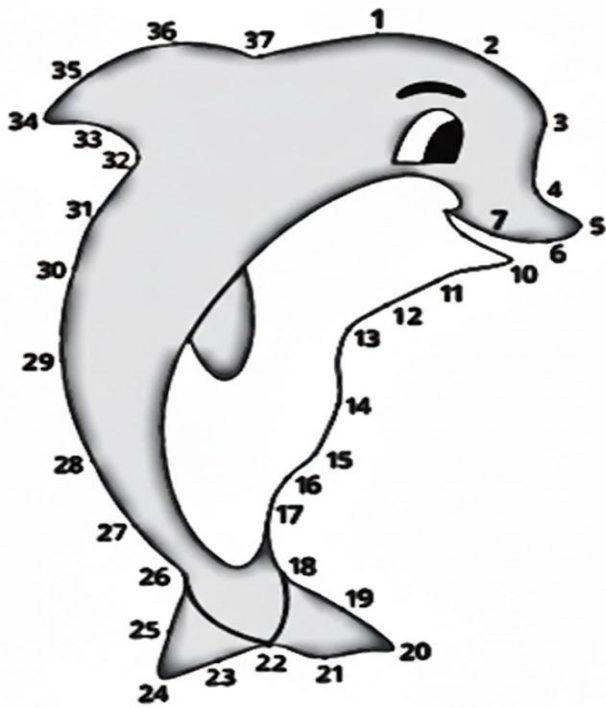
Ex-13 CBE Observation:-

1. Observe your class and count the number of boys. Are they even or odd?

Ans . Eg: 14- Even

13- Odd

Warm-up



Dolphin



Exercise 1.1

Page no- 3

INT



1. Circle the correct number for the following number names.

a. Fourteen	44	41	40	(14)
b. Forty-four	40	14	26	(44)
c. Fifty-five	(55)	50	56	20
d. Seventy-one	(71)	51	17	91
e. Seventeen	(17)	71	70	77
f. Sixty-six	60	(66)	76	86

2. Unscramble the letters in column A to make number names. Then, match them with the numbers in column B.

Column A	Column B
e n tten.....	90
i n e n y tninety.....	40
v e n s e y tseventy.....	10
f r o y tforty.....	70



Exercise 1.2



1. Write the place value and the face value of the underlined digit in the numbers given below.

Number	Place Value	Face Value
<u>4</u> 5	4 tens or forty	4
9 <u>6</u>	6 ones or six	6
4 <u>1</u>	1 one or one	1
<u>3</u> 2	3 tens or thirty	3
6 <u>7</u>	7 tens or seven	7
8 <u>5</u>	5 ones or five	5

Let us practise writing the place value and the face value.



2. Complete the following table.

Expanded Form	Standard Form
20 + 8 <u>28</u>
<u>90</u> + 1.....91.....
80 + 6 <u>86</u>
<u>40</u> + 9.....49.....
<u>70</u> + 3.....73.....

3. Guess the number.

I am more than 11.
 I am less than 14.
 I am an odd number.
 Who am I?

Ans - 13



Exercise 1.3

INT



1. Fill in the missing numbers.

a. b. c.

d. e. f.

2. Fill in the blanks by counting forward or counting backwards.

- a. 20 19 18 17 16 15 14 13 12 11
 b. 43 44 45 46 47 48 49 50 51 51

3. Compare the numbers and circle the correct statements.

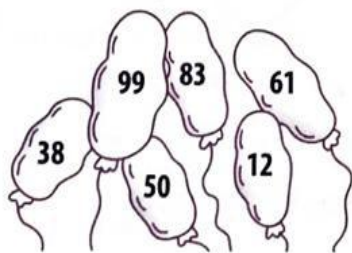
- a. **2 = 2** b. **5 < 7** c. **16 < 11** d. **7 = 17**
 e. **3 < 1** f. **3 = 3** g. **20 = 10** h. **19 > 20**
 i. **5 > 5** j. **4 > 3** k. **9 < 12** l. **18 > 12**

INT



4. Write the numbers as directed.

a. Ascending Order



b. Descending Order





Exercise 1.4

Page no- 10

INT



1. Tick the even numbers and cross out the odd numbers.

1 ✗ 32 ✓ 13 ✗ 24 ✓ 35 ✗ 96 ✓ 77 ✗
 49 ✗ 10 ✓ 99 ✗ 82 ✓ 51 ✗ 60 ✓

2. Read and write the names in the correct order.

Priya is between Sara and Aryan.

Diksha is the eleventh.

Sara is the third woman.

The twelfth person is Chinky.

Aryan is the eighth man.

The sixth woman is Prachi.

The first man is Gurmeet.

The second person is Anil.

Supriya is the tenth woman.

Jayeeta is the fourth.

Paras is the ninth man.

Niki is the fifth person.

Ans Gurmeet Anil Sara Jayeeta Niki Prachi
1st Priya Aryan Paras Supriya Diksha 12th Chinky

INT



Chapter Review

Page no- 12

FLUENCY

1-2

3-4

5

MULTIPLE CHOICE QUESTIONS

- Which of the following is the number name of 78?
 a. seventy-six b. forty-five c. seventy-eight d. thirty-two
- Which of the following is the numeral for seventy-two?
 a. 65 b. 98 c. 23 d. 72
- Which number is 10 more than 24?
 a. 34 b. 44 c. 28 d. 30
- Which of the following numbers are arranged in the descending order?
 a. 97, 86, 54, 23, 12 b. 97, 12, 54, 86, 12
 c. 86, 54, 12, 23, 97 d. 12, 23, 54, 86, 97
- Rohit wrote the numbers in order as 36, 46, 47, 48, 49, and 50. Which of the following numbers is not a part of the number sequence?
 a. 36 b. 46 c. 48 d. 50