



EVS

Student's Buddy

Class - I

Term – I(Session:- 2025-26)



Subject : EVS Syllabus

Month	Topics	Activities
April/ May	Ch-1 About Me Ch-2 My Body Ch-3 Looking after My Body	1. 'LET'S TALK' about Myself 2. Fun with Rhymes 3. Yoga (Will do Surya Namaska)
June	Ch-4 Clothes We Wear Ch-5 Food We Eat	1. AIL- 1 Clothes We Wear 2. Eat Healthy Stay Healthy [Bring healthy food in lunchbox]
PT- I Syllabus Ch-1 About Me , Ch- 2 My Body, Ch-3 Looking after My Body, Ch- 4 The Clothes We Wear		
July	Ch-6 Safety Rules Ch-7 My Family	1. Making flash card on Safety 2. Speaking few lines on my Family
August	Ch- 8 We Need Shelter Ch-9 Our Neighbourhood	1 SEA 1- We Need Shelter 2. Speak few lines on any neighbourhood place
September	Revision	
Half-Yearly Examination Ch-5 Food We Eat, Ch-6 Safety Rules, Ch-7 My Family, Ch-8 We Need Shelter, Ch-9 Our Neighbourhood		
October	Ch-10 My School Ch-11 People Who help Us	1. My school- Write a few lines on it. 2. Talk about how to behave with your helpers.
November	Ch-12 Festivals We Celebrate Ch-13 Travelling is Fun	1. Make a New Year Card to wish you friend. 2. AIL2- Transport - Identify the different vehicles and colour it.
December	Ch-14 The World of Plants Ch-15 The World of Animals	1. Collect and paste different types of leaves in a scrapbook 2. Paste animals that cannot fly in a scrapbook.
PT- II Syllabus Ch-10 My School, Ch-11 People Who help Us, Ch-12 Festivals We Celebrate, Ch-13 Travelling is Fun		
January	Ch-16 Water and Air Ch-17 Weather	1. SEA -II - Different uses of water 2. Riddle Time and colouring activity
February	Ch-18 In the Sky	1. Students will draw and colour day and night
Annual Examination Ch-8 We Need Shelter Ch-9 Our Neighbourhood, Ch-14 The World of Plants, Ch-15 The World of Animals, Ch-16 Water and Air, Ch- 17 Weather, Ch-18 In the Sky		

DELHI PUBLIC SCHOOL, GANDHINAGAR

Academic Session: 2025-26

Worksheet-1

Ch-1 About Me

Date: _____

Q.I Fill in the blanks:

1. My name is _____.
2. I am a _____(boy/girl).
3. I am _____years old.
4. My favourite colour is _____

**Draw, colour and name
your favourite fruit.**

**Draw, colour and name
your favourite vegetable.**

Draw, colour and name

My favourite toy _____

My Favourite cartoon

DELHI PUBLIC SCHOOL, GANDHINAGAR

Academic Session: 2025-26

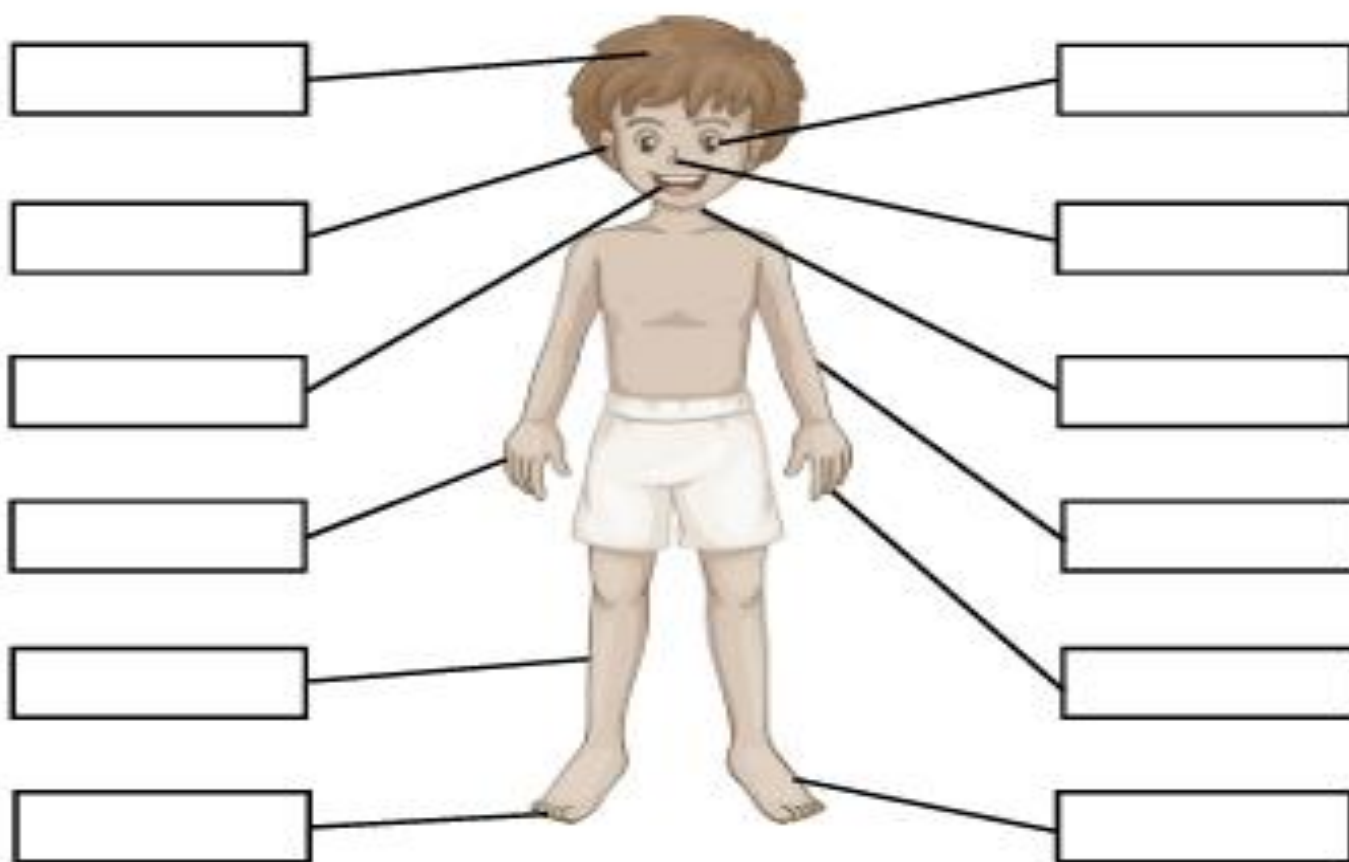
Worksheet-2

Ch-2 (My Body)

Date:_____

Q.I Label the parts of the body.

arm	hand	leg	foot
eye	mouth	ear	nose
neck	toes	fingers	head



Q.II Circle the parts of the body that has two.



DELHI PUBLIC SCHOOL, GANDHINAGAR

Academic Session: 2025-26

Worksheet-3

Ch-2 My Body

Date: _____







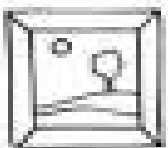



Q.I Write T for true and F for false for the following sentences.

1. I have ten toes. _____
2. I hear the bell with my eyes. _____
3. I have two hands and two feet. _____
4. My arms and legs help me to skip. _____
5. I write with my legs _____

Q.II Circle the odd one out.

- | | | |
|---------|-------|-------|
| 1. cry | jog | hop |
| 2. toes | ankle | neck |
| 3. eyes | nose | skin |
| 4. clap | run | write |

Q.III Match the sense organs with its function.

SIGHT	SMELL	HEARING	TASTE	TOUCH
				
				

DELHI PUBLIC SCHOOL, GANDHINAGAR

Academic Session: 2025-26


Worksheet-4

Ch-3 Looking after My Body

Date: _____

Q.I Look at the picture and fill the blanks.

I drink _____
glasses of water every day.



I take bath

I eat _____
_____ food.



I wash my hand _____
and _____ taking meals.

DELHI PUBLIC SCHOOL, GANDHINAGAR

Academic Session: 2025-26

Worksheet-5

Ch-4 Clothes We Wear

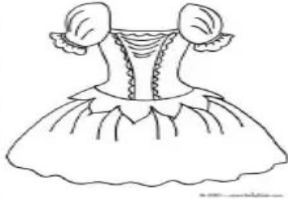
Date: _____

Q.I Fill in the blanks with the given words.


[warm , protect, cotton raincoat , gumboots]

1. Clothes _____ us from heat, cold , rain.
2. We wear _____ clothes in summer.
3. Woollen clothes keep us _____
4. We use a _____ and _____ when it rains.

Q.II Identify the clothes and name the seasons.



Q.III Find the word search puzzle.




Q.IV Solve the riddle.


i) It is a very cold season. We wear woollen clothes like sweater, shawl, cap , socks and gloves and drink hot or coffee.



ii) It is a very hot season. we wear cotton clothes and drink more water and juices.



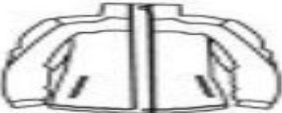







iii) It is a short season. Trees are full of new leaves and flowers.



d) Times for us to use raincoat , gumboots and umbrella.



Q.V Fill in the missing letters.

	j_ck_t		sk_rt
	tr__n_rs		sl_pp_rs
	sh_rt		sc_rf
	sh_rts		tr__s_rs

DELHI PUBLIC SCHOOL, GANDHINAGAR





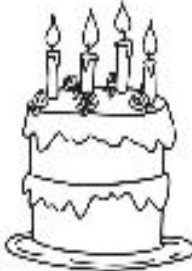
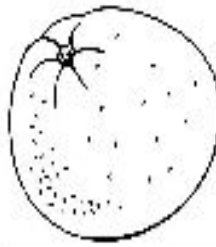




Academic Session: 2025-26

Worksheet-6


Ch-5 Food We Eat

Date: _____

QI. Tick and colour the food item which you like to eat and cross the food items you dislike.

Food I Like				
				
<input type="checkbox"/>	<input type="checkbox"/>	<input type="checkbox"/>	<input type="checkbox"/>	<input type="checkbox"/>
				
<input type="checkbox"/>	<input type="checkbox"/>	<input type="checkbox"/>	<input type="checkbox"/>	<input type="checkbox"/>

Q.II Cross out the junk food and colour the food which is good for us.



DELHI PUBLIC SCHOOL, GANDHINAGAR

Academic Session: 2025-26


Worksheet-7

Ch-5 Food We Eat

Date: _____

Q.I Fill in the blanks.

1. We get food from plants and _____.
2. Fruits and vegetables keep us _____.
3. Rice and wheat give us _____.
4. _____ is the first meal of the day.
5. People living in desert get milk from _____.




Q.II Name the following.

1. Last meal of the day is called.

2. An animal which gives eggs.


3. A meal we eat late in the morning in place of breakfast and lunch.

4. A vegetable that we eat it raw.




Q.III. Draw, name and colour.

1. A milk product



2. A vegetable



DELHI PUBLIC SCHOOL, GANDHINAGAR



Academic Session: 2025-26

Worksheet-8

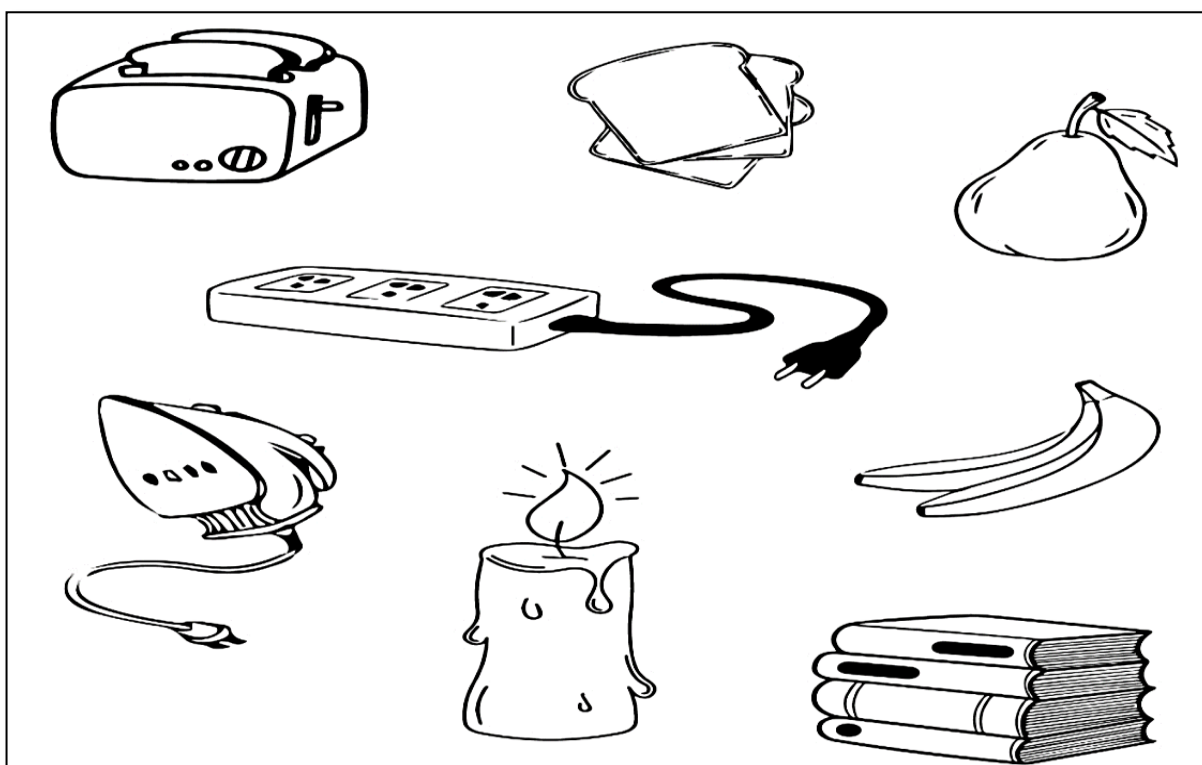
Ch-6 Safety Rules

Date: _____.

Q.I Draw two safe objects and two unsafe objects.

Safe Objects 	Unsafe objects 

Q.II Circle the unsafe objects and colour them red.



DELHI PUBLIC SCHOOL, GANDHINAGAR

Academic Session: 2025-26

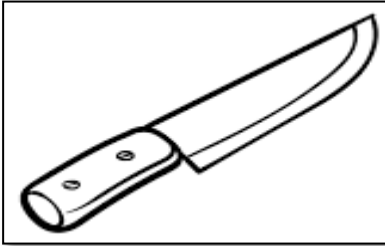
Worksheet-9

Ch-6 Safety Rules

Date: _____

Q. I. Look at the picture and circle the correct name of objects which are not safe for playing.

1.




knife ball

1.



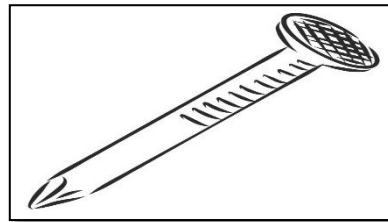
matchsticks feather

3.



pencil scissors

4.



nail eraser

Q. II Write T for True and F for False for the following sentences.

1. We should jump on chairs and desk in the class. _____
2. We should stop when the traffic lights turn red. _____
3. We should not talk with a stranger. _____
4. Wearing seat belts while travelling by car keep us safe from jerks or an accident. _____

Q.III Choose the options to complete the answer.

(helmet, traffic lights, float)

1. Lights on the roads to have safety. _____
2. People should wear when riding a bike. _____
3. We should use a float when we are beginner in swimming.

DELHI PUBLIC SCHOOL, GANDHINAGAR

Academic Session: 2025-26

Worksheet-10


Ch-7 MY Family

Date: _____

Q. I Name the following.

i) A family with parents and one or two children is called?

Ans. _____




2. A family with parents and more than two children is called?

Ans. _____



3. A family with grandparents, parents, children, uncles, aunts and cousins living together in same house is called?

Ans. _____



Q. II Choose the correct name for each member of your family with the help of related pictures given below.

(mother, grandfather, brother/sister, myself, father, grandmother)



He is my



She is my



He is my



She is my



He is my



She is my

DELHI PUBLIC SCHOOL, GANDHINAGAR

Academic Session: 2025-26


Worksheet 11

Ch-8 We Need Shelter

Date: _____

Q. I Fill in the blanks.

1. Houses are of two types _____ house and _____ houses.
2. We rest and sleep in our _____.
3. Kutcha houses are usually found in _____.
4. Houses in hot places have _____ roofs.
5. Mother cooks food in the _____.



Q. II Name the pictures with the help of word clue.

Igloo



Houseboat

Bungalow

Hut

Apartment

Tent



DELHI PUBLIC SCHOOL, GANDHINAGAR

Academic Session: 2025-26

Worksheet 12

Ch-9 Our Neighbourhood

Date: _____

Q.I Give two examples.

1. Places in your neighbourhood.

Ans. i. _____ ii. _____

2. Places where you visit every day in your neighbourhood.

Ans. i. _____ ii. _____

3. Places of worship.

Ans. i. _____ ii. _____

4. Places from where we get public transport.

Ans. i. _____ ii. _____

Q.II Match the services to the correct neighbourhood.

A

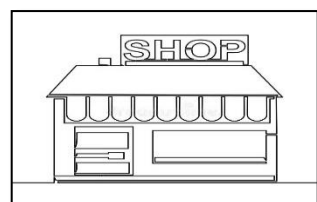
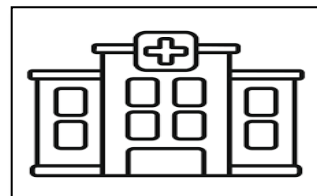

i) We go to buy a pencil

2. We go when we are sick

3. To complain about robbery

4. We go to study

B



DELHI PUBLIC SCHOOL, GANDHINAGAR

Academic Session: 2025-26

TERM I Subject Enrichment Activity – 1

Name: _____

Date: _____

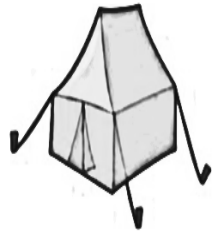
Q.I Tick the correct answer:

1. Which of the following is used to build a house?
a. bricks b. paper c. paper
2. People build their house on _____, at the place where it rains a lot.
a. trees b. bridges c. slop
3. Identify the types of house in the given figure.

a. Igloo

b. tent

c. caravan



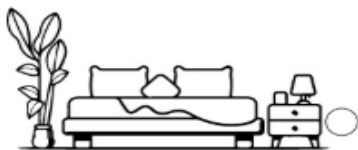
Q.II Match the following.



Garden



Kitchen




Dining Room



Bedroom



Garage



Living Room

Balcony



Bathroom



DELHI PUBLIC SCHOOL, GANDHINAGAR

Academic Session: 2025-26

TERM 1 Art Integrated Learning -1


Name: _____

Date: _____

Q.I Complete the following table:

NO	SEASON	CLOTHES	WHY
i)	Summer		Keep our body cool
2.		Woollen	
3.	Rainy		To stay dry when we go out in the rain

Q.II Fill the words for the given picture.



DELHI PUBLIC SCHOOL, GANDHINAGAR

Academic Session: 2025-26

TERM I REFLECTION -1

Name: _____

Date: _____

Q. I Fill in the blanks.

1. The day when we are born is our _____(**birthday /anniversary**) .
2. We use our _____(**nose/eyes**) to see the world.
3. We should drink _____(**clean /dirty**) water.
4. We wear _____(**uniforms/ cotton clothes**) in school.
5. We get _____(**food /snacks**) from plants and animals.

Q. II Answer in one word.

1. What is the thing we cut and celebrate our birthday?

Ans. _____



2. Which sense organ helps us to feel the world?

Ans. _____



3. What does food give us?

Ans. _____


4. What is the other name for small family?

Ans. _____



5. Who keeps us safe from thieves?

Ans. _____





Delhi Public School, Gandhinagar

Model Paper Periodic Test -I

Class-I

EVS

Date:

Time:1hour

M. Marks: 20

Name: _____ Sec: _____ Roll No: _____

General Instructions:

- (i) All the questions are compulsory.
- (ii) Answer the questions as per the instructions.

Q.I Tick the correct option.


1. Reena reads in her free time, it is her _____.

- i) dance ii) hobby iii) game



2. Tom wants to touch a teddy bear; he will use his _____ to touch it.

- i) mouth ii) leg iii) hand



3. We must _____ to keep our body healthy and strong.

- i) body ii) exercise iii) crawl

4. My parents drink 6 to 8 glasses of _____ water every day.

- i) muddy ii) clean iii) dirty



5. Clothes protect our body from cold, dust and _____.

- i) smart ii) heat iii) cotton

6. Baby is feeling cold, she will wear _____ clothes to keep her body warm.

- i) raincoat



- ii)



cotton

- iii) woollen



7. Raju eats healthy food, but he doesn't _____ the food properly.

i) water

ii) chew

iii) play

8. Choose the correct picture: Brush your _____ before going to bed.



9. We use both _____ and _____ to do swimming.



i) tongue-teeth

ii) nose-mouth

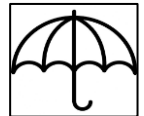
iii) hands-legs

10. Your mother wants to go out, but it is raining. She will carry an _____.

i) comb

ii) bottle

iii) umbrella



Q.II Write True (T) or False (F) for the following sentences:

i) Wool is used to make cotton clothes. _____

ii) We should always eat Junk food. _____

iii) We taste with our tongue. _____

iv) I am unique. _____

Q.III Fill in the blanks with the help of the given clues :

i) We wear _____ (simple / special) clothes for occasions.

ii) I can feel with my _____. (ears / skin)

iii) We all are _____ (different / same) from each other.

iv) Dancers wear costumes while _____ (cooking / dancing).

Q.IV Unscramble the letters to name them:

i) SRHIT

--	--	--	--	--

ii) HADE

--	--	--	--

iii) BDOY

--	--	--	--

iv) ACP

--	--	--

QV. Give two examples.

1. Name any two clothes we wear in winter.

i) _____

ii) _____

2. Write your any two favourite things

i) _____

ii) _____

QVI. Draw, name and colour. (Any two Sense Organs)

2×1=2





Delhi Public School, Gandhinagar
Model Paper Half-Yearly Examination

Class: I

EVS

Date:

Time: 2 hours

M. Marks: 40

Name: _____ **Sec:** _____ **Roll No:** _____


General instructions

- (i) All the questions are compulsory.
- (ii) Answer the questions as per given instructions.

Q.I Choose the correct option.

1. Ria eats bread and jam every day before going to school. This is called _____.

- i) breakfast ii) lunch iii) dinner



2. We should always walk on the _____.

- i) pavement ii) road iii) railway track



3. Rahul visits Kashmir during his summer vacation. Houses in these places have _____ roofs.

- i) Sloping roof ii) flat roofs iii) none of these

4. Manan lives with her mother, father, uncle, aunt, and grandparents. She lives in _____ family.

- i) Big family ii) joint family iii) small family



5. We should take a balance diet as food gives us _____

- i) Energy ii) clothes iii) air

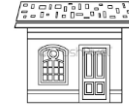
6. Ram and his parents were going for pool party, Ram should carry _____ with him.

- i) toys ii) swimming tube iii) badminton



7. Aayan lives in a house made from things like cement, iron, concrete and wood,
Identify the name of their house?

- i) kutcha house ii) pucca house iii) igloo





8. Raman wants to sleep, so he will go in _____ to sleep.



- i) kitchen ii) storeroom iii) bedroom



9. Siya is a small girl, she should not play with?



10. If you are feeling hungry, from the following options what is a healthy snack you can eat?



11. Mummy wants to buy grocery. She will go to a _____

- i) Market ii) temple iii) police station



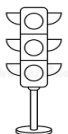
12. Mia has many rooms in her house, where does she eat her food?

- i) dining room ii) bedroom iii) drawing Room



13. Rohan is driving his car. He will stop his car when the traffic light is _____

- i) green ii) blue iii) red



14. Mia's teacher told not to eat food from road side during rainy season because it
is _____

- i) healthy ii) unhealthy iii) none of these

15. Sam asked his father why we should not touch any electric socket with his wet hands?

i)for safety

ii) for fun

iii) for chasing

16. My mother wants to keep her money safe. Choose the correct neighbourhood place for it.

i)mosque

ii) bank

iii) park



17. I am not well. My mother will take me to the _____.

i)hospital

ii) park

iii) bank

18. Hina wants to go Rajkot by bus. Where she will go to board the bus?

i)Auto stand

ii) bus stand

iii) post office

19.Tina should not take her head out of the car's window because it is _____

i)good habit

ii) safe

iii) not safe

20. Pooja lives in a desert she will get milk from _____

i) camel

ii) crow

iii) fish



Q.II Fill in the blanks with correct option:

i) We celebrate special days with our_____.(family/ strangers)

ii) Houses in hot places have _____ roof.(sloping/flat)





iii) My father cooks food for me in the _____.(kitchen/ bedroom)

iv) We must walk in a _____ while going up and down the stairs.(line/ push)

Q.III Write T for true and F for false statements:





- i) We should not respect our family members. _____
- ii) We must help our neighbours. _____
- iii) We should say “thankyou” when someone helps you. _____
- iv) Post Office is a place where people buy and sell things. _____

Q.IV Match the following:

1.	Milk product	()	a.	
2.	Vegetable	()	b.	
3.	Hospital	()	c.	
4.	Made of mud	()	d.	

Q. V Write the names of the pictures with the help of given option:

Tent house	Temple	Park	Bus Stop
------------	--------	------	----------

Q. VI Give two examples:

i) Rooms in a house.

a) _____ b) _____

ii) Food we eat from plants.

a) _____ b) _____

iii) Safety rules for school.

a) _____ b) _____

Q. VII Answer the following questions:

1. Kutcha house is made of which materials?


Ans. A kutcha house is made of things like _____, straw, bamboo, _____ and dry leaves.

2. What is safety?


Ans. Safety means staying _____ from getting _____ or danger.

Q. VIII Draw, name and colour.

1. A special house



2. Anyone food from plants



CLASS -1

EVS

TERM -2

Subject : EVS Syllabus

Month	Topics	Activities
April/ May	Ch-1 About Me Ch-2 My Body Ch-3 Looking after My Body	i) 'LET'S TALK' about Myself 2. Fun with Rhymes 3. Yoga (Will do Surya Namaska)
June	Ch-4 Clothes We Wear Ch-5 Food We Eat	i) AIL- 1 Clothes We Wear 2. Eat Healthy Stay Healthy [Bring healthy food in lunchbox]
PT- I Syllabus Ch-1 About Me , Ch- 2 My Body, Ch-3 Looking after My Body, Ch- 4 The Clothes We Wear		
July	Ch-6 Safety Rules Ch-7 My Family	i) Making flash card on Safety 2. Speaking few lines on my Family
August	Ch- 8 We Need Shelter Ch-9 Our Neighbourhood	1 SEA 1- We Need Shelter 2. Speak few lines on any neighbourhood place
September	Revision	
Half-Yearly Examination Ch-5 Food We Eat, Ch-6 Safety Rules, Ch-7 My Family, Ch-8 We Need Shelter, Ch-9 Our Neighbourhood		
October	Ch-10 My School Ch-11 People Who help Us	i) My school- Write a few lines on it. 2. Talk about how to behave with your helpers.
November	Ch-12 Festivals We Celebrate Ch-13 Travelling is Fun	i) Make a New Year Card to wish you friend. 2. AIL2- Transport - Identify the different vehicles and colour it.
December	Ch-14 The World of Plants Ch-15 The World of Animals	i) Collect and paste different types of leaves in a scrapbook 2. Paste animals that cannot fly in a scrapbook.
PT- II Syllabus Ch-10 My School, Ch-11 People Who help Us, Ch-12 Festivals We Celebrate, Ch-13 Travelling is Fun		
January	Ch-16 Water and Air Ch-17 Weather	i) SEA -II - Different uses of water 2. Riddle Time and colouring activity
February	Ch-18 In the Sky	i) Students will draw and colour day and night
Annual Examination Ch-8 We Need Shelter Ch-9 Our Neighbourhood, Ch-14 The World of Plants, Ch-15 The World of Animals, Ch-16 Water and Air, Ch- 17 Weather, Ch-18 In the Sky		

DELHI PUBLIC SCHOOL, GANDHINAGAR
ACADEMIC SESSION 2025-26
WORKSHEET – 10

Ch-10 My School

Date: _____ Q.I

Q. I Complete the following:

[gardener, canteen, Peon , watchman , medical room , auditorium]

1. _____rings the bell .
2. A.....take care of the plants.
3. I guard the school
4. You buy things to eat from here_____.
5. We go in the.....when we are unwell.
6. Functions are held in the.....

Q.II Colour and write the activity which you do in the school.



Q.3 Find the hidden word from the given word puzzle.

pencil
glue
bag

eraser

L	T	P	A	Y	Q	X	B	Y	Z
S	O	A	J	D	Y	K	B	A	G
B	V	P	E	N	C	I	L	B	S
P	T	E	U	D	Q	G	W	O	F
K	W	R	O	M	M	L	E	O	C
P	R	U	L	E	R	U	F	K	M
E	R	A	S	E	R	E	X	Q	C
N	D	B	T	R	J	A	F	T	D
B	U	S	J	Y	O	N	L	I	C
D	P	I	N	N	I	M	M	U	R

ruler
pin
book
bus

DELHI PUBLIC SCHOOL, GANDHINAGAR
ACADEMIC SESSION 2025-26
WORKSHEET – 11

Ch-11 People Who Help Us

Date: _____

Q.I Unscramble the letters to find the names of the people who help us.


1. CFHE - _____

2. DERIVR - _____

3. TAEHCER - _____

4. DOTCRO - _____


5. SLODIER - _____




Q.II Write T for True and F for False for the given statements.

1. A postman delivers milk. _____
2. A greengrocer sells fruits and vegetables. _____
3. A sweeper keeps our schools or home clean. _____
4. Many people help us in our daily life. _____
5. A bus driver help us to look after garden. _____
6. We should respect people who help us. _____

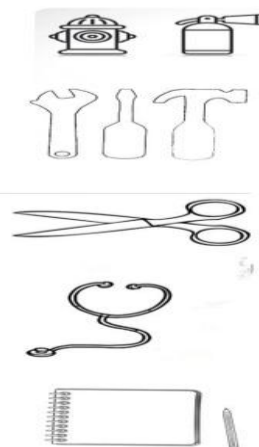
Q.III Colour the picture and write the name of community helper.



Q.IV Help the fire fighter to put off the fire.



Q.V Match the picture.



DELHI PUBLIC SCHOOL, GANDHINAGAR







ACADEMIC SESSION 2025-26

WORKSHEET – 12

Ch-12 Festivals We Celebrate

Date: _____

Q.I Observe the picture of festivals and write (N) for National festival (R) for Religious festival.

Q.II Write T for True and F for False for the given statements.

1. On Eid ul – Fitr people offer namaz. _____
2. We celebrate Gandhi Jayanti on 15th July. _____
3. A grand parade is held at Kartavya path . _____
4. In Diwali we distribute sweets to our friends and neighbour and wish each other .

Q.III Tick the correct answer.

1. Where do Muslims go to worship?

i) Temple

ii) Mosque

iii) Church

2. Which of these is the holy book of Sikhs?

i) Bible

ii) Guru Granth Sahib

iii) All of these

3. _____ is the national festival.

i) Eid

ii) Diwali

iii) Gandhi Jayanti

Q.4 Draw and decorate the Christmas tree.



Q.5 Colour the Santa Claus for Christmas.



Ch-13 Travelling is Fun

Date: _____





I. Fill in the blanks with the given words:-

wheels six Vehicles man

1. _____ take us from one place to another.
2. Most means of transport run on _____.
3. The wheel is one of the greatest invention of _____.
4. Buses and trucks have _____ wheels.




II. Label the following means of transport:-



1. _____
2. _____
3. _____
4. _____

III. Draw and colour your favourite means of transport.



Ch-14 The World of Plants.

Date: _____

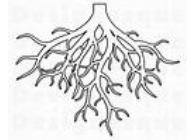
Q.I Tick the correct answer.

i) _____ is the part of the plant that lies under the ground.

i) root

ii) stem

iii) leaves



2. _____ are very big and strong plants.

a) herbs

ii) shrubs

iii) trees



3. A _____ grows into a new plant.

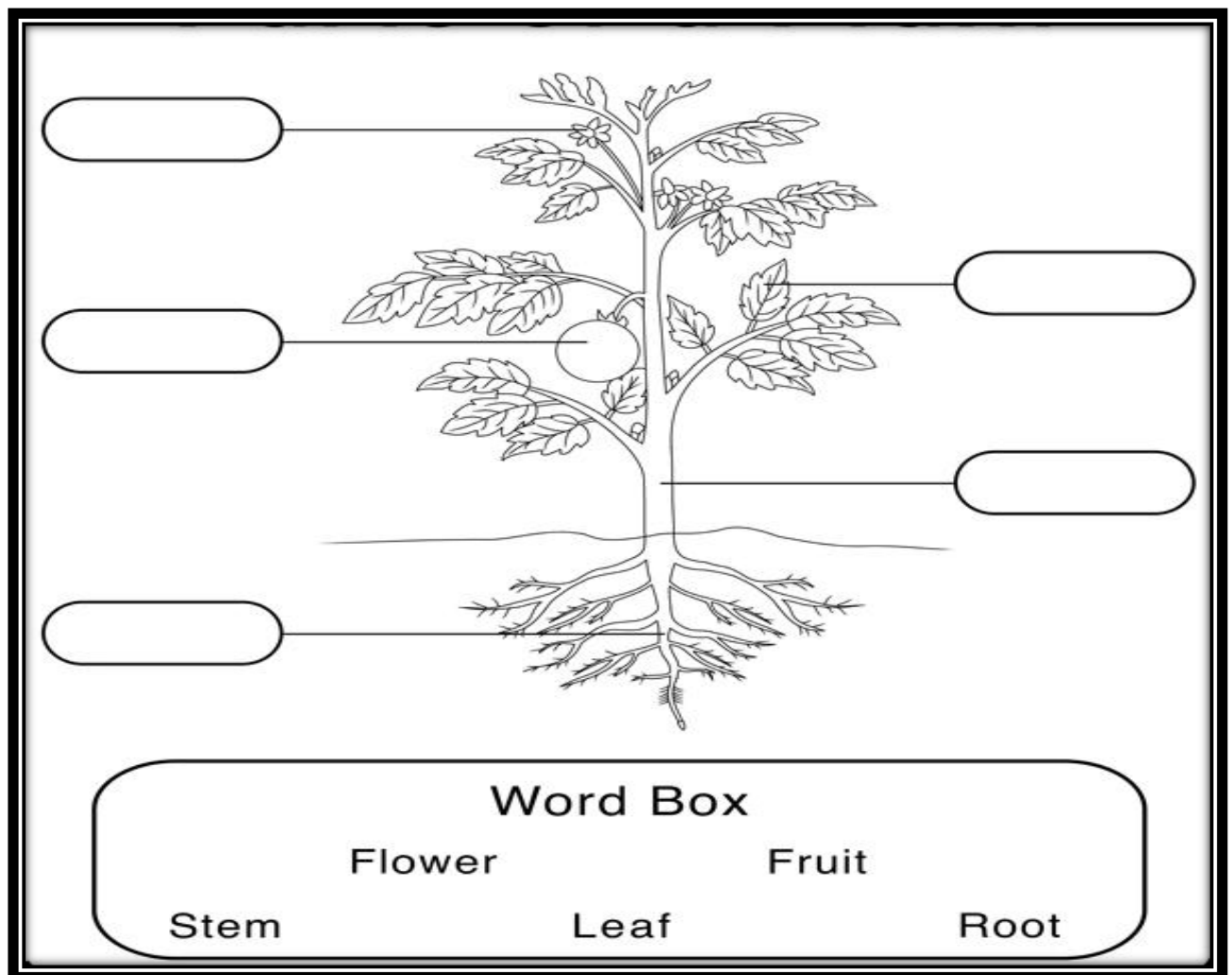
a) seed

ii) stem

iii) root








Q.II Label the different parts of the plant shown below.




Q.III Fill in the blanks:-

1. Pumpkin is an example of _____.
2. Plants need _____, _____ and _____ to grow.
3. _____ have soft and green stems.
4. Grapevine is an example of _____.
5. Rose plant is an example of _____

Q.IV Match the following.

Type of Plant	Example
1.Tree	 Rose
2.Climbers	 Mint
3.Creeper	 Apple
4.Shrub	 Money plant
5.Herb	 Pumpkin

Q.V Label and colour it



DELHI PUBLIC SCHOOL, GANDHINAGAR
ACADEMIC SESSION 2025-26
WORKSHEET – 15


Ch-15 The World of Animals.

Date: _____

Q.I Tick the correct answer.

1. Which of the following animal gives us milk?

- i) hen ii) dog iii) goat



2. Which of the following animal lives in water?

- i) elephant ii) giraffe iii) whale

3. _____ is a bird that cannot fly

- i) penguin ii) crow iii) sparrow



4. We get wool from _____.

- i) duck ii) owl iii) rabbit



5. Ostrich is a _____

- i) bird ii) wild animal iii) domestic animal

Q. II Q.II Write T for True and F for False for the given statements.

1. Cow is a very small animal.

2. Deer are domestic animals.















3. Woodpeckers live on trees.

4. We can keep a tiger as a pet in our home.

5. Goat gives us milk.

6. Penguin cannot fly.

Q III. Match the animals with their respective homes.

<p>i)</p> 	<p>a.</p> 
<p>2.</p> 	<p>b.</p> 
<p>3.</p> 	<p>c.</p> 
<p>4.</p> 	<p>d.</p> 
<p>5.</p> 	<p>e.</p> 
<p>6.</p> 	<p>f.</p> 
<p>7.</p> 	<p>g.</p> 

1. _____ 2. _____ 3. _____ 4. _____ 5. _____ 6. _____ 7. _____

DELHI PUBLIC SCHOOL, GANDHINAGAR
ACADEMIC SESSION 2025-26
WORKSHEET – 16

Ch-16 Air and Water.

Date: _____

Q.I Circle the object that are filled with air.



Q.II Write T for True and F for False for the given statements.

1. Dirty air makes us healthy. _____
2. Air is used to play a trumpet. _____
3. Air is needed for burning. _____
4. We should throw waste in water bodies. _____
5. Plant cannot grow properly without water. _____

Q.III Tick the correct answer.

1. Which of the following is present all around us?
i) Air ii) ice iii) water
2. _____ takes in air from water.
i) Human ii) horse iii) fish

3. Fast and strong wind causes a _____.

i) Wind

ii) breeze

iii) storm

4. We can use water for _____.

i) Putting out fire


ii) burning

iii) making kite fly

Q.IV Name the following uses of water



Showering



D_____



C_____



W_____ C_____



W_____ D_____



W_____ H_____



B_____ T_____



W_____ C_____



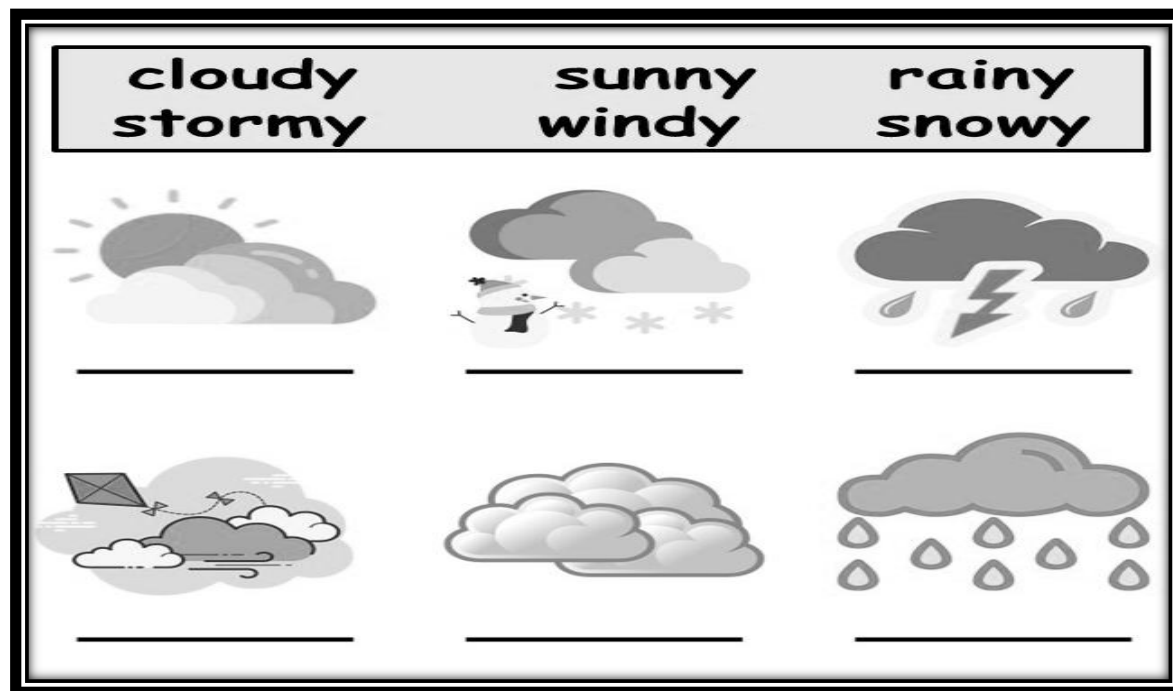
W_____ G_____

DELHI PUBLIC SCHOOL, GANDHINAGAR
ACADEMIC SESSION 2025-26
WORKSHEET – 17

Ch-17 Weather

Date: _____

Q.I Write the names of different days having different weather conditions.



Q.II Tick the correct answer.

1. On which of the following days we should wear jackets and sweaters?

- i) Sunny and hot ii) Rainy iii) Cold

2. Windy days are _____.

- i) Hot ii) cool iii) cloudy

3. We go for swimming on a _____ day.

- i) cold ii) sunny iii) windy

4. On a cloudy day we do not get the heat of _____.





- i) sun ii) moon iii) star

Q.III `Write T for True and F for False for the given statements.

1. The weather of a place does not change. _____
2. We wear cotton clothes on a sunny and hot day. _____
3. The weather becomes cool after the rain. _____
4. We wear woollen clothes on a windy day. _____
5. Sometimes , a rainbow can be seen on a rainy day. _____

Q.IV Fill in the blanks with the help of word bank given below.

(warm cold cool hot)

	In summers we go to the beach and the weather is _____.
	In spring the flowers grow and the weather is _____ .
	In autumn the leaves fall from the trees and the weather is _____.
	In winters it snows and the weather is _____.

DELHI PUBLIC SCHOOL, GANDHINAGAR
ACADEMIC SESSION 2025-26
WORKSHEET – 18

Ch-18 In the Sky

Date: _____

Q.I Fill in the blanks.

1. The sky looks _____ in colour during the day.
2. The _____ is a big ball of fire.
3. The sky looks dark at _____.
4. We see _____ at night in different shapes.
5. _____ twinkle at night when the sky is clear.

Q.II Write the names of phases of the moon shown in the pictures.



1. _____



2. _____



3. _____



4. _____

Q.III Give one word answer:

1. Who gives us heat and light? _____
2. Where do you see sun, moon and stars? _____
3. Which is the brightest star in the sky? _____
4. What are tiny bright dots of light called that can be seen in the night sky? _____

Q.IV Draw the given pictures in appropriate boxes.



Day Sky

Night Sky

DELHI PUBLIC SCHOOL, GANDHINAGAR
ACADEMIC SESSION 2024-25


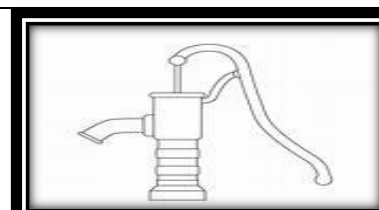


TERM II Subject Enrichment Activity – 2

Name: _____


Date: _____

Q.1 Observe the pictures and write the names of different sources of water.

(pond, lake, sea, river , well , borewell, ocean , rain)



Q.2 Write different uses of water.



DELHI PUBLIC SCHOOL, GANDHINAGAR
ACADEMIC SESSION 2025-26
TERM II Art Integrated Learning -2

Name: _____

Date: _____

Q.1 Write the name of means of transport for the given pictures and colour with blue for water transport, green for land transport and red for air transport.



LAND



DELHI PUBLIC SCHOOL, GANDHINAGAR
ACADEMIC SESSION 2025-26
TERM II CBE -2

Name: _____

Date: _____

Q.I Choose the correct option for the following.

1. A parade is held at _____ on the Republic Day every year.

- i) Kartavya Path ii) Taj Mahal iii) playground

2. Simran is fond of reading books, in her free period she always found in the school's _____.

- i) canteen ii) music room iii) library

3. Tiya said to her sister that a very interesting fact about a _____, it can live in both on land as well as in water.

- i) dog ii) fish iii) turtle

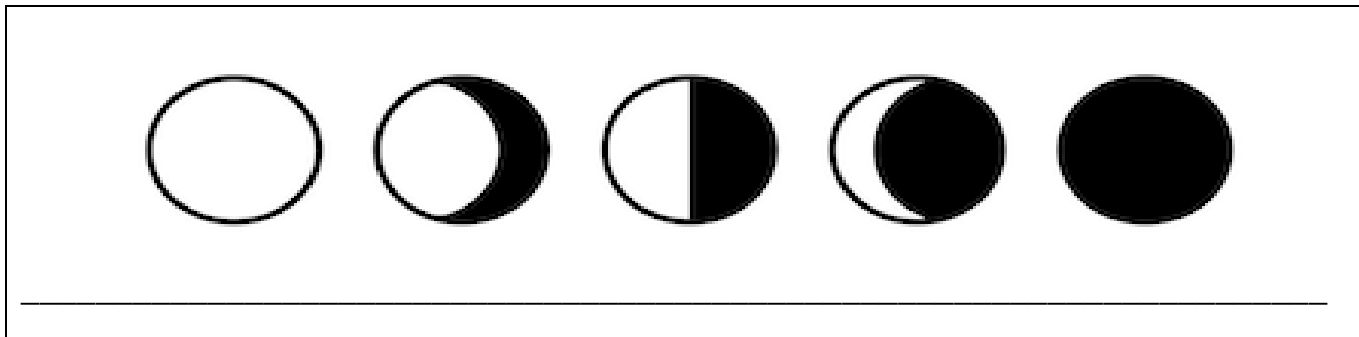
4. Our EVS teacher explained in the class that clean water has no colour, no taste or _____.

- i) legs ii) smell iii) food

5. Maya has observed that clothes dry faster on a _____.

- i) rainy day ii) cloudy day iii) windy day.

Q.II In below given picture, identify the phases of _____ and name it properly.



DELHI PUBLIC SCHOOL, GANDHINAGAR
ACADEMIC SESSION 2025-26
TERM II REFLECTION -2

Name: _____

Date: _____

Q.I Unscramble the letters to write the correct word.

1. DMESOTIC _____

2. CLODYU _____

3. LEAESV _____

4. CREEERP _____

5. WNIYD _____

Q.II Tick the correct option.

1. The biggest water body is _____.

i) tank

ii) lake

iii) sea

2. A person who put the fire off is _____.

i) cobbler

ii) fireman

iii) peon

3. The _____ keeps changing every day.

i) season

ii) Sundays

iii) weather

4. All living being need air to _____.

i) swim

ii) jump

iii) breath

5. The brightest object in the sky during the day time is _____.

i) kite

ii) sun

iii) rocket



Delhi Public School, Gandhinagar

Model Paper Periodic Test -II Examination

Class: I

EVS

Date:

Time: 1 hour

M. Marks: 20

Name: _____ Sec: _____ Roll No: _____

General Instructions:

- (i) *All the questions are compulsory.*
- (ii) *Answer the questions as per the instructions.*

Q.I **Tick the correct option.**

1. Shruti likes to do clay work and other activities. She will go to _____ to do all the activities.

i) staffroomii) canteeniii) activity room
2. Name the room where students sit and read the books.

i) libraryii) playgroundiii) computer room
3. There is a beautiful garden in Manik's house. A _____ looks after the garden.

i) gardenerii) policemaniii) doctor
4. Vedant wants to purchase a wooden study table; to whom will he meet to get his table?

i) masonii) carpenteriii) green grocer

5. **Unscramble the word CELNARE and choose the correct answer:**

i) CARELEN

ii) CLEANER

iii) ARENCEL

6. **John is a Christian; he loves to decorate the Christmas tree on _____.**

i) 25th December

ii) Holi

iii) Eid



7. **Which festival do we celebrate on 26th January?**

i) Republic Day

ii) Independence Day

iii) Gurpurab



8. **Name the person who washes our clothes.**

i) washerman

ii) langar

iii) gardener

9. **_____ is a free meal served in Gurudwara on Gurpurab.**

i) Prasad

ii) Langar

iii) Meal

10. **Rakesh Sharma was the first Indian to reach the moon. He reached there by a _____.**

i) boat

ii) bike

iii) rocket



Q.II

Write (T)for correct statement and (F) for incorrect statement.

- i. Diwali is called the festival of colors. ()
- ii. A plumber fixes and repairs leaking pipes and taps. ()
- iii. Train, bus, car are some means of water transport. ()
- iv. Auditorium is a big hall in which school functions are held. ()

Q.III Match the following

- i. **Christmas** ()



- ii **Water transport** ()



- iii **Doctor** ()



- iv **Computer room** ()



Q.IV Give two examples:

- i) People who help us.(a)_____ (b)_____

- ii) Rooms in a school (a) _____ (b) _____

Q.V Answer the following questions:

i) Why do we go to school?

Ans. _____
_____.

ii). **What does a mason do?**


Ans. _____
_____.

Q.VI Draw name and colour.

(i) water transport



(ii) Our National Flag





Delhi Public School, Gandhinagar

Model Paper Annual Examination (2024-25)

Class : 1

Time: 2 hours

EVS

Date:

M. Marks: 40

Name: _____ Sec: _____ Roll No: _____

General Instructions:

(i) All the questions are compulsory.

(ii) Answer the questions as per the instructions.

Q.I Tick the correct option:

1. Which is the brightest object seen in the sky during day time?

i)star

ii) sun

iii) moon

2. The water in seas and oceans is _____.

i)salty

ii) sweet

iii) bitter

3. Which of the following do you use on a rainy day?

i)raincoat and umbrella

ii) cotton shirt

iii) woollen sweater

4. We cannot _____ air.

i)see

ii) breathe

iii) feel

5. When Rahul went to the terrace at night, he saw the moon round.

Which among the following types of the moon did he see in the sky?

i)half-moon

ii) full-moon

iii) both

6. Which of the following helps a parachute to fly?
i)air ii) water iii) soil
7. Which of the following types of plants have soft and weak stems and grow with the support of another plant?
i)herb ii) shrub iii) climbers
8. Mohit went to the zoo and saw an animal that lives both on land as well as in water. Which among the following animals he might have seen in the zoo?
i)lion ii) fish iii) crocodile
9. The red light says _____.
i)stop ii) go iii) wait
10. Father and mother are our _____.
i)parents ii) grandparents iii) uncle
11. Our uncle's and aunt's children are our _____.
i)siblings ii) cousins iii) sister
12. Which of the following activities can save water?
i)we should turn off the tap after using.
ii)we should keep the tap open while taking bath
iii) none of these
13. _____ is the medical help we give to an injured or sick person before the doctor comes.
i)Safety ii) First Aid iii) pavement

14. A beautiful and bright bow of seven colors seen after the rain is called _____.
i)rainbow ii) weather iii) rainy
15. _____ are the tiny bright dots of light you see at night in the sky.
i)clouds ii) stars iii) moon
16. Which part of the plant grows below the ground?
i)root ii) stem iii) fruit
17. Which among the following animals is used to carry loads?
i)tiger ii) donkey iii) cow
18. Which among the following is a water animal?
i)octopus ii) sheep iii) butterfly
19. A _____ grows into a new plant.
i)leaf ii) seed iii) root
20. In some families, children live with only their father or their mother. Such families are called _____ families.
i)big ii) single parent iii) joint

Q. II Fill in the blanks:

- i) Never _____(sit/jump) on a bed or sofa.

- ii) A family with parents and one or two children is called a _____(small/joint) family.
- iii) A tree has a thick and strong stem called _____. (shoot/trunk)
- iv) A _____(turtle/whale) live on land as well as in water.
- v) Moving air is called _____. (wind/storm)

Q.III Write True(T) for the correct statement or False(F) for the wrong statement:

- i) Water should be boiled and filtered before drinking. _____
- ii) Tiny animals with six legs are called birds. _____
- iii) Clean water has no colour, taste or smell. _____
- iv) The weather is very hot on a chilly day. _____
- v) We should not lean over a balcony railing. _____

Q.IV Give two examples:

i) Wild animals

ii) Weather Conditions

iii) Phases of the moon

Q. V **Answer in one word:**
 [Sun, shrubs, storm]

i) Small plants having hard and strong stems.

ii) Fast and strong winds that can cause damage to houses and trees.

iii) A huge ball of fire.


Q.VI **Answer the following questions:**

i. How is the weather on a cloudy day?

ii. Write any two things we get from plants.

Q.VII **Draw, name and colour:**

i. A thing you get from plant



ii. Night sky

