

Delhi Public School, Gandhinagar 2026-27
CLASS -I SCIENCE [ISCO]-Answer Key

Student Name:		
Total Questions : 20	Guidelines for the Candidate	Time : 1 hour
1.	Additional 10 minutes will be given to the students to fill up the students' information before the start of the exam.	
2.	All questions are compulsory. There is no negative marking. Use of calculator is not permitted.	
3.	Write your Roll no, Name and Class clearly on the answer sheet and do not forget to sign.	
4.	There is only one correct answer hence mark one choice only.	
5.	Darken your choice with HB pencil or Blue/Black ballpoint pen.	
6.	Rough work should be done in the blank space provided in the booklet.	
7.	Return the answer sheet to the invigilator at the end of the exam. The question paper can be retained by the student.	

1. Joey is the name of the baby of which animal?



- A. dog B. kangaroo ✓ C. horse D. cat

2. Which of the following is the natural source of light?

- A. The lamp B. The candle C. The sun ✓ D. The torch

3. Which part of the plant helps it to breathe?

A. ✓



B.



C.



D.







4. We wear _____ clothes in summer season.

- A. woollen B. cotton ✓ C. raincoat D. Both A & B

5. Who is a carpenter?

- A. One who makes furniture ✓
- B. One who paints
- C. One who builds the house
- D. One who repairs shoes

6. Select the correct option.

- A.  lives in water
- B.  lives in den
- C.  lives in kennel ✓
- D.  lives in a tree

7. I am a soft internal organ that pumps blood throughout the body.





- A. ✓ 
- B. 
- C. 
- D. 

8. Select the correct sequence of words to complete the paragraph given below.

Summer days are _____ while winter days are _____. A strong wind blows on _____. Monsoon days are _____.

- A. Cold, hot, rainy, a windy day
- B. Hot, cold, a windy day, rainy ✓
- C. A windy day, cold, hot, rainy
- D. Rainy, hot, cold, a windy day

9. We get wool from

A. 	B. 	C. 	D. ✓ 
--	--	--	---

10. Which of the following is not a milk product?

- A.** Cold drink ✓ **B.** Curd **C.** Ghee **D.** Butter

11. A peacock belongs to which category?

- A.** insect **B.** bird ✓ **C.** fish **D.** mammal

12. In the annual function of a school, students wore _____ to perform on the stage.




- A.** costumes ✓ **B.** uniform **C.** party wear clothes **D.** simple clothes

13. The house shown in the given picture is called a/an _____.

- A.** Caravan
B. Igloo ✓
C. Stilt house
D. Tent




14. Ruby's father is a farmer. She says that he grows a crop that is used to obtain oil. Her father grows _____ plant.

A.  Sunflower ✓	B.  Spinach	C.  Pea	D. Both A and B
--	---	---	---------------------------

15. Your school bus stops when traffic signal shows a ____ light.

- A. Yellow B. Pink C. Red ✓ D. Blue

16. Observe the following pictures and choose the correct options about the picture.

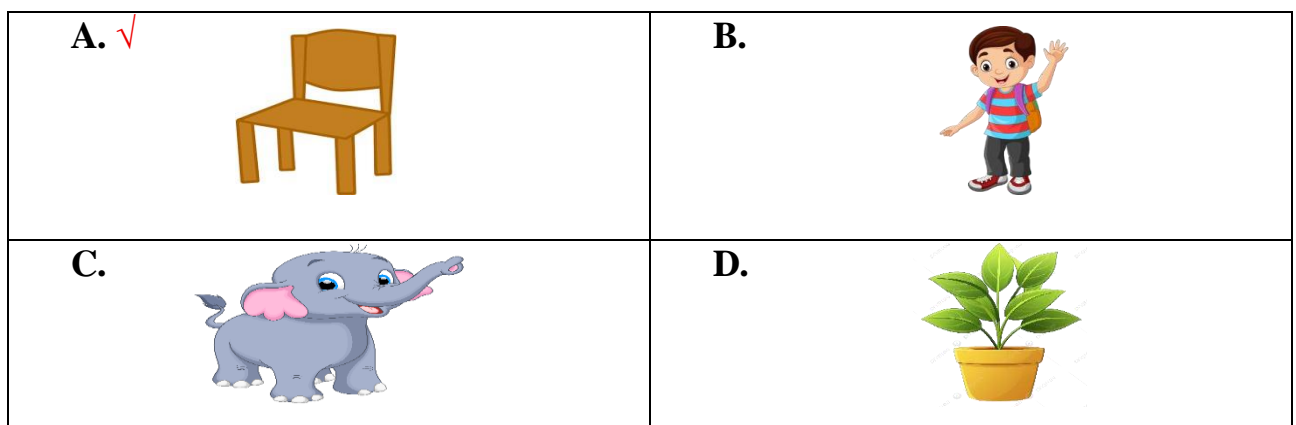


- A. Figure I shows air occupies space.
B. Figure II shows air helps in burning.
C. Both figures show air is important for breathing.
D. Both A & B ✓

17. Which of the following item can be eaten raw?

- A. Potato
B. Cauliflower ✓
C. Lady's finger
D. Both A & B

18. Which of the following is not a living thing?



19. Which of the following statements is correct?

- A.** Never flush the toilet after use.
- B.** Keep your toys here and there.
- C.** Do not take bath everyday.
- D.** Wash your hands before and after eating. ✓

20. _____ gives its own light, while _____ shines by reflecting light falling on it.

- A.** Sun, Star
- B.** Star, Moon ✓
- C.** Moon, Sun
- D.** Star, Sun