



**Delhi Public School Gandhinagar**  
**Academic Session 2023-24**  
**Science Aptitude Test (NSO)**

<b>Student Name:</b>		
<b>Total Questions : 40</b>	<b>Guidelines for the Candidate</b>	<b>Time : 1 hr</b>
1.	Additional 10 minutes will be given to the students to fill up the students' information before the start of the exam.	
2.	All questions are compulsory. There is no negative marking. Use of calculator is not permitted.	
3.	Write your Roll no, Name and Class clearly on the answer sheet and do not forget to sign.	
4.	There is only one correct answer hence mark one choice only.	
5.	Darken your choice with HB pencil or Blue/Black ball point pen.	
6.	Rough work should be done in the blank space provided in the booklet.	
7.	Return the answer sheet to the invigilator at the end of the exam. The question paper can be retained by the student.	

**Q.1 Which body part helps us to walk?**

(A)



(C)



(B)



(D)



**Q.2 Which part of the mouth helps us bite and chew our food?**

(A)

tongue

(C) lips

(B)

teeth

(D) none of the above

**Q.3 Unscramble the letters to make the correct words : “CNLEA”**

- |           |           |
|-----------|-----------|
| (A) CNLEA | (C) CLEAN |
| (B) ALENC | (D) ANLEA |

**Q.4 In which season do we use raincoats?**

- |            |            |
|------------|------------|
| (A) Rainy  | (C) Winter |
| (B) Summer | (D) Spring |

**Q. 5 Who among the following mends our shoes?**

- |                |                   |
|----------------|-------------------|
| (A) Carpenter  | (C) Cobbler       |
| (B) Blacksmith | (D) None of these |

**Q.6 If your friend fell off from his cycle and injured himself, where would you take him?**

- |                    |              |
|--------------------|--------------|
| (A) School         | (C) Office   |
| (B) Police Station | (D) Hospital |

**Q.7 You should \_\_\_\_\_ your food while eating.**

- |           |           |
|-----------|-----------|
| (A) Dance | (C) Sleep |
| (B) Drink | (D) Chew  |

**Q.8 Who stitches our clothes?**

- |             |                |
|-------------|----------------|
| (A) Cobbler | (C) Washer man |
| (B) Tailor  | (D) Carpenter  |

**Q.9 Which of the following is not a sense organ?**

- |           |            |
|-----------|------------|
| (A) heart | (C) tongue |
| (B) eyes  | (D) skin   |

**Q.10 For which part of the body is the given item used?**



- |             |          |
|-------------|----------|
| (A) Stomach | (C) Hair |
| (B) Eyes    | (D) Legs |

**Q.11 Which picture indicates crossing the road?**

- (A) 

(B) 

(C) 

(D) 

**Q.12 What type of dress you will wear if you are going to visit a doctor?**


- (A) Party wear


(B) Simple clothes of light colour


(C) Fancy clothes


(D) None of these

**Q.13 Identify the small family.**

- (A) 

(B) 

(C) 

(D) 

**Q.14 Which picture of house shows a kutch house?**

- (A) 

(B) 

(C) 

(D) 

**Q.15 Unscramble the letter to write the correct name of a neighbourhood “HSPOTIAL”**

- (A) HOSPITAL (C) HSPOTIAI  
(B) PISHOSTAL (D) HOSPIATL



**Q.16 We have lunch and dinner with our family in the \_\_\_\_\_ room.**

- (A) bedroom (C) dining room  
(B) drawing room (D) kitchen

**Q.17 A nurse and a doctor wear different \_\_\_\_\_.**

- (A) uniform (C) party dress  
(B) costume (D) night dress

**Q.18 Identify the place of neighbourhood.**

- (A) (C)



- (B) (D)



**Q.19 Mark two objects you should not play with:**

- (A) Knife, scissors (C) Both A and B  
(B) soft toy (D) None of the above

**Q.20 Where does people living in desert get milk from?**

- (A) cow (C) curd  
(B) camel (D) cheese

**Q.21 Select the INCORRECT option.**

- (A) We go to hospital when we are sick. (C) We play indoor game at home  
(B) We keep our money in a garden (D) All of the above

**Q.22 Identify the festival shown in the given picture.**

- (A) Dussehra (C) Navratri  
(B) Christmas (D) Eid



**Q. 23 Roja had to make four pairs each having one wild animal and one domestic animal but she made a mistake while making one of the pairs. Select INCORRECT pair.**

- (A) Elephant , Dog (C) Cow, Horse  
(B) Lion , Goat (D) Tiger, Sheep

**Q. 24 \_\_\_\_\_ new mango plant can grow from the seed obtained from a mango fruit.**

- (A) Seven (C) four  
(B) One (D) Nine

**Q. 25 \_\_\_\_\_ gives its own light while \_\_\_\_\_ shines by reflecting light falling on it.**

- (A) Sun, Star (C) Star, Sun  
(B) Moon, Sun (D) None of these

**Q. 26 Based on types of plant, select the odd one out among the following.**

- (A) Banyan (C) Hibiscus  
(B) Coconut (D) Neem

**Q. 27 Which of the following objects can be used to show that air fills space?**

- (A) Rice (C) Balloon  
(B) Glass (D) Towel

**Q.28 Suhani read the forecast in the newspaper as shown here. Which of the following items, she should carry while going out for shopping?**



- (A) Goggles and umbrella
- (B) Raincoat and umbrella
- (C) Goggles and Sweater
- (D) Gumboot and umbrella

**Q. 29 When air moves slowly, it is called**

- (A) Storm
- (B) Wind
- (C) Breeze
- (D) Fog

**Q. 30 Refer to the given word grid. Which of the following season is hidden in this grid?**

- (A) Season when we love to eat an ice-cream.
- (B) Season when snow falls at some places.
- (C) Season when we use to wear cotton clothes.
- (D) Both B and C

S	P	R	A	I	T
G	F	E	U	L	A
W	I	N	T	E	R
S	P	S	U	R	I
S	T	A	M	O	O
M	O	O	N	N	G

**Q. 31 On which date do we celebrate our Independence Day?**

- (A) 15<sup>th</sup> August
- (B) 14<sup>th</sup> November
- (C) 26<sup>th</sup> January
- (D) 15<sup>th</sup> November

**Q. 32 Which of these do we get from a climber plant?**

- (A) Bitter Gourd
- (B) Grapes
- (C) Pea
- (D) All of these


**Q. 33 \_\_\_\_\_ is the room of the school in which children sit and read books .**

- (A) Auditorium
- (B) Office
- (C) Library
- (D) Toy room

**Q. 34 \_\_\_\_\_ prepare food for the plants.**

- (A) Fruit
- (B) Stem
- (C) Leaves
- (D) Flower

**Q. 35 Four different professionals are hidden in the given puzzle. Solve the puzzle and select the professional who is not hidden in the puzzle.**

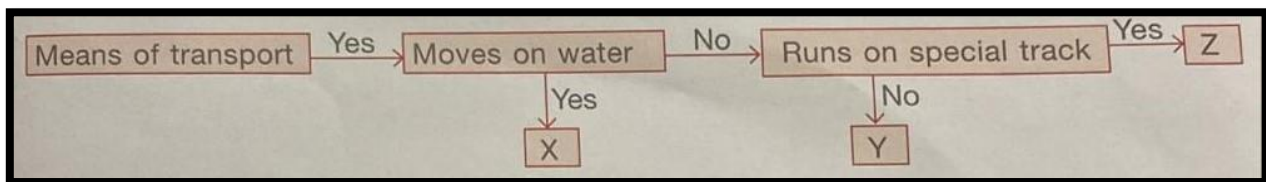


- (A) A person makes clay pots
- (B) A Person who stitches clothes
- (C) A person who treats the patients
- (D) A persons who sells medicines

**Q. 36 How many colours are there in a rainbow?**

- (A) 6
- (B) 7
- (C) 9
- (D) 8

**Q.37 Study the given flow chart. Identity X, Y, Z and select the correct option.**



- (A) X could be car whereas Z could be aeroplane.
- (B) Y could be ferry whereas Z could be helicopter.
- (C) X could be boat whereas Y could be train.
- (D) Y could be ship whereas Z could be submarine.

**Q.38 Select the plant that can be placed in the same group to which X belongs.**



- (A) Watermelon plant
- (B) Mint plant
- (C) Pea plant
- (D) Tulsi plant

**Q. 39 Study the given chart carefully. Which of the following correctly identifies X, Y and Z?**

	X	Y	Z
A	Ostrich	Housefly	Whale
B	Butterfly	Spider	Octopus
C	Penguin	Bedbug	Shark
D	Ostrich	Emu	Duck



**Q.40 Which of the following is known as ‘The Ship of the Desert’**

(A)



(C)



(B)



(D)



THE END