



Delhi Public School Gandhinagar
Academic Session 2025-26
Computer Science Aptitude Test (CSAT)

Student Name:

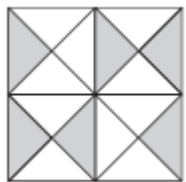

Total Questions : 35

Guidelines for the Candidate

Time : 1 hr

| 1. | PATTERN & MARKING SCHEME | | | |
|----|--|-----------------------|--------------------|-----------------------|
| | Section | (1) Logical Reasoning | (2) Computers & IT | (3) Achievers Section |
| | No. of Questions | 5 | 25 | 5 |
| | Marks per Ques. | 1 | 1 | 2 |
| 2. | Additional 10 minutes will be given to the students to fill up the students' information before the start of the exam. | | | |
| 3. | All questions are compulsory. There is no negative marking. Use of calculator is not permitted. | | | |
| 4. | Write your Roll no, Name and Class clearly on the answer sheet and do not forget to sign. | | | |
| 5. | There is only one correct answer hence mark one choice only. | | | |
| 6. | Darken your choice with HB pencil or Blue/Black ball point pen. | | | |
| 7. | Rough work should be done in the blank space provided in the booklet. | | | |
| 8. | Return the answer sheet to the invigilator at the end of the exam. The question paper can be retained by the student. | | | |

LOGICAL REASONING

| | | | | | | | | |
|----|---|----|----|-----|---|-----|----|----|
| 1. | How many lines of symmetry are there in the given figure? | | | |  | | | |
| | a) | 0 | b) | 1 | c) | 2 | d) | 3 |
| 2. | Find the missing number in the number series given below. | | | |  | | | |
| | a) | 60 | b) | 120 | c) | 100 | d) | 80 |

3. Select a figure from the options which will complete the given figure pattern.

a) b) c) d)

4. If yesterday was Tuesday, then what day of the week will it be eighth day from today?

a) Tuesday b) Wednesday c) Thursday d) Friday

5. The codes for some letters are given below.

| | | | | | | | | |
|---------|---|---|---|---|---|---|----|---|
| Letters | N | S | U | R | A | V | E | O |
| Codes | - | © | + | @ | ! | x | \$ | # |

Find the code for REASON.

a) @ \$! © # - b) @ \$! # x # c) @ \$ © ! # - d) @ ! \$ © # x

COMPUTERS AND INFORMATION TECHNOLOGY

6. Which of the following is known as a file manager application of Windows 10?

a) b) c) d)

7. Which type of software is Windows 7?

a) Utility Software b) Application software c) Language Processor d) System Software

8. Caps key is used to type the alphabets in capital. What is another method to do so?

a) Shift + alphabet b) Ctrl + alphabet c) Alt + alphabet d) All of these

9. Which of the following is used to explore the internet?

a) Browser b) Spreadsheet c) Clipboard d) Draw

10. It is used to draw figures directly on the screen.

a) Joystick b) Scanner c) Light Pen d) None of these

11. Who is known as the Father of Disk Drive?

a) Charles Babbage b) John Napier c) Blaise Pascal d) Reynold. B. Johnson

12. It is the smallest unit of data and has either a value 0 or 1.








a) Bit b) Byte c) Nibble d) Kilobyte

13. The shortcut key to make the text Italic is _____.


a) Ctrl + V b) Ctrl + R c) Ctrl + I d) Ctrl + O

14. The command which allows you to print is _____.

| | | | | | | | | |
|-----|---|-------------|----|---------------|----|-------------------|----|-----------------|
| | a) | Tab + B | b) | Shift + B | c) | Ctrl + P | d) | Ctrl + D |
| 15. | In MS-Paint: While working with text, you can change the font type and font size using the _____. | | | | | | | |
| | a) | Text pop-up | b) | View menu | c) | Text tab | d) | Design box |
| 16. | What type of data is sent via SMS? | | | | | | | |
| | a) | E-mail | b) | Text Messages | c) | Facebook Messages | d) | Twitter Updates |
| 17. | Crop command in MS Paint is present in the _____ group. | | | | | | | |
| | a) | Tools | b) | Image | c) | Shapes | d) | Text |
| 18. | What is the process of Start or Restart called? | | | | | | | |
| | a) | Exit | b) | Text | c) | Boot | d) | Programs |
| 19. | _____ command changes only one end of the image. | | | | | | | |
| | a) | Rotate | b) | Flip | c) | Skew | d) | Copy |
| 20. | When your computer stops working suddenly it is called _____. | | | | | | | |
| | a) | Die | b) | Down | c) | Help | d) | Crash |
| 21. | Which of the following is an example of Hardware? | | | | | | | |
| | a) | DVD Player | b) | Mobile Phone | c) | Camera | d) | All of these |
| 22. | Which command will move the LOGO cursor in forward direction? | | | | | | | |
| | a) | FD | b) | BK | c) | LT | d) | RT |

| | | | | | | | | |
|-----|---|---|----|---|----|--|----|---|
| 23. | What is the full form of WAN? | | | | | | | |
| | a) | Wide Area Network | b) | White Area Network | c) | Wide Area Net | d) | None of these |
| 24. | While working with MS-Paint which option is used make your drawing look bigger? | | | | | | | |
| | a) | Pencil | b) | Brush | c) | Magnifier | d) | Eraser |
| 25. | _____ feature of MS-Word 2016 allows you to highlight the selected text in a bright color. | | | | | | | |
| | a) |  | b) |  | c) |  | d) | B |
| 26. | What all do you need to get connected to the Internet? | | | | | | | |
| | a) | Internet Service Provider | b) | Modem | c) | Software | d) | All of these |
| 27. | Spelling & Grammar command is present in _____ group. | | | | | | | |
| | a) | Proofing | b) | Comments | c) | Compare | d) | Paragraph |
| 28. | _____ is the collection of data stored in a storage device. | | | | | | | |
| | a) | Harddisk | b) | File | c) | Control panel | d) | Pen Drive |
| 29. | Internet is used for audio and video calling across geographies. A popular tool for such internet calls is _____. | | | | | | | |
| | a) |  | b) |  | c) |  | d) |  |
| 30. | You are playing music on your computer. However, you cannot hear the music. Which of the following devices should be checked? | | | | | | | |
| | a) | Mike | b) | Speaker | c) | Microphone | d) | Mouse |

ACHIEVERS SECTION

| ACHIEVERS SECTION | | | | | | | | | |
|-------------------|--|----------------------|----|----------------------|----|-----------------------------|----|----------------------|--|
| 31. | In MS-Word 2010: A horizontal series of cells in a table is called _____. | | | | | | | | |
| | a) | Horizontal | b) | Column | c) | Row | d) | Cell | |
| 32. | In MS-Word 2010: The shapes and Symbols are present in the _____ group of the Home Tab. | | | | | | | | |
| | a) | Paragraph | b) | Font | c) | Insert | d) | Styles | |
| 33. | Lavie typed this sentence in a word processing document. • I Love India. He then selected the whole sentence and clicked on B then <u>U</u> . | | | | | | | | |
| | a) | I Love India. | b) | <u>I Love India.</u> | c) | <u>I Love India.</u> | d) | <i>I Love India.</i> | |
| 34. | When you run into problems or questions with software, which menu option should you choose? | | | | | | | | |
| | a) | Help | b) | File | c) | Text | d) | Design | |
| 35. |  How has this figure been transformed ? It has been _____ | | | | | | | | |
| | a) | Reflected | b) | Rotated | c) | Shifted | d) | Translated | |

ANSWER KEY

| | | | | | | | | | |
|---|---|----|---|----|---|----|---|----|---|
| 1 | b | 9 | a | 17 | b | 25 | a | 33 | d |
| 2 | d | 10 | c | 18 | c | 26 | d | 34 | a |
| 3 | b | 11 | d | 19 | c | 27 | a | 35 | b |
| 4 | b | 12 | a | 20 | d | 28 | b | | |
| 5 | a | 13 | c | 21 | d | 29 | a | | |
| 6 | d | 14 | c | 22 | a | 30 | b | | |
| 7 | d | 15 | c | 23 | a | 31 | c | | |
| 8 | a | 16 | b | 24 | c | 32 | c | | |