



Delhi Public School, Gandhinagar

Periodic Test - I (2019-20)

Class: I	G.K	Date: 05/08/19
Time: 1 hour		M. Marks: 20
Name: _____ Sec: _____ Roll No: _____		

General Instructions:

- All the questions are compulsory.
- Answer the questions as per given instructions.

Q.I Fill in the blanks with the help of given words in the box: 5X1=5

Mango	Rabbit	Giraffe	Cheetah	Lion
--------------	---------------	----------------	----------------	-------------

- (a) _____ has long neck.
- (b) _____ is known as the 'king of jungle'.
- (c) _____ lives in a burrow.
- (d) _____ is the fastest land animal.
- (e) _____ is also called as the 'king of all fruits'.

Q.II Write (T) for correct statement and (F) for wrong statement: 5X1=5

- (a) Sea horse is a water animal. _____
- (b) Honey bees live in bee hives. _____
- (c) Owl is a bird that makes hooting sound. _____
- (d) Penguin is a bird that lives in desert. _____
- (e) Carrot is a root vegetable. _____

Q.III Give one word answer for the following: 3X1=3

- (a) This male bird has long, colourful and beautiful feather. _____
- (b) I am a bright small animal and I live in nest. _____
- (c) I am a friendly domestic animal and I live in kennel. _____

Q.IV Match the following:

4X1=4

- (a) Duck
- (b) Horse
- (c) Lion
- (d) Owl
- () Den
- () Webbed feet
- () Hole
- () Stable

Q.V Answer the following question:

1X1=1

- (a) Who is the Headmaster of your school?

Ans. Mr. _____ is the Headmaster of my school.

Q.VI Draw, name and colour the following:

2X1=2

- (a) I am a fruit, my name and colour is the same.

Draw	Name

- (b) I am a flower and I grow in water.

Draw	Name



Delhi Public School, Gandhinagar
Periodic Test-I (2019-20)

Class I

Computer Science

Date: 29.07.19

Time: 1 hour

M. Marks: 10

Name: _____ Sec: _____ Roll No.: _____

General Instructions:

- 1) All the questions are compulsory.
- 2) Answer the questions as per given instructions.

Q-I Picture Quiz (Put \checkmark mark on correct option)

1*4=4

1. Which of the following is a machine?



- a) b) c)

2. Which of the following machine does not work on electricity?



- a) b) c)

3. Which of the following machine works on battery?



- a) b) c)

4. Which of the following help us save time?



- a) b) c)

Q-II Write Yes or No in the bracket.

1*2=2

1. Computer remembers things.
2. Human being make mistakes.

Q-III Circle the following given words in the following grid.

1*4=4

[BUS , TABLET, BATTERY , TIME]

B	G	P	Q	R	U	B
U	R	S	H	I	P	A
S	U	A	S	G	H	T
O	C	T	I	M	E	T
V	K	D	Y	I	L	E
T	A	B	L	E	T	R
S	D	X	V	B	G	Y



Delhi Public School, Gandhinagar
Periodic Test - I (2019-20)

Class: I

EVS

Date: 22.07.19

Time: 1 hour

M. Marks: 20

Name: _____ Sec: _____ Roll No: _____

General Instructions:

- All the questions are compulsory.
- Answer the questions as per given instructions.

Q.I Fill in the blanks with the help of given words in the box: 4X1=4

buds creepers lotus shapes

1. Climbers and _____ are weak plants.
2. The water lily and _____ grow in water.
3. Leaves are of different _____ and sizes.
4. Flowers grow from _____.

Q.II Match the following: 5X1/2=2 1/2

- | A | B |
|---------------|-------------|
| 1. Coconut | () Flower |
| 2. Grapevine | () Green |
| 3. Musk-melon | () Climber |
| 4. Leaves | () Creeper |
| 5. Daisy | () Tree |

Q.III Give two examples: 4X1/2=2

1. Flowers: _____, _____.
2. Climbers: _____, _____.

Q.IV Answer the following questions in one word: 2X1=2

1. Name a plant that grows in hot places.

Ans. _____.

2. What is the colour of a leaf?

Ans. _____.

Q.V Write (T) for True statement and (F) for False statement:

4X1=4

- 1. Leaves are mostly red in colour.
- 2. Flowers grow from buds.
- 3. Trees are weak and small plants.
- 4. Fir tree grows in cold places.

Q.VI Colour the given pictures and circle their correct name:

5X1½=2½

1.




- a. Rose b. Water lily

2.




- a. Orchid b. Marigold

3.




- a. Pipal leaf b. Maple leaf

4.



- a. Fir tree b. Coconut tree

5.




- a. Cactus plant b. Pea plant

Q.VII Draw, name and colour the following:

2X1½=3

1. A tree

2. A leaf





Delhi Public School, Gandhinagar

Periodic Test I (2019-20)

Class: I

Hindi

Date: 15.07.19

Time: 1 hour

M. Marks: 20

Name: _____ Sec: _____ Roll No: _____

निर्देश :

- सभी प्रश्न अनिवार्य हैं।
- निर्देशानुसार प्रश्नों के उत्तर लिखिए।

प्रश्न १ - दिए गए खाली स्थान में स्वर लिखिए।

8 x 1/2 = 4

(क) अ _____ ई

(ख) उ _____ ए

(ग) _____ ओ _____

(घ) अं _____

प्रश्न २ - अक्षरों को मिलाकर लिखिए।

4 x 1 = 4

(क) अ + ब = _____

(ख) म + ा + ल + ा = _____

(ग) क + ल + म = _____

(घ) क + ा + न = _____

प्रश्न ३ - वाक्य रचना।


2 x 1 = 2


(क) फल - _____।

(ख) अनार - _____।

प्रश्न ४ - चित्रों के सही नाम पर गोला लगाइए ।

3 x 1 = 3

(क)  - कार कमल माता

(ख)  - अदरक गमला घर

(ग)  - छाता बस हाथ

प्रश्न ५ - उचित स्थान पर (।) मात्रा लगाकर शब्द पूरे कीजिए ।

6 x 1/2 = 3

ग — जर गमल — प — न
क — म र — त ग — य

प्रश्न ६ - समान तुक वाले शब्द लिखिए।

4 x 1/2 = 2

(क) झट _____ (हट / बाजा)
(ख) नल _____ (बस / जल)
(ग) मत _____ (मन / खत)
(घ) हाथ _____ (साथ / माता)

प्रश्न ७ - दिए गए शब्दों के चित्र बनाइए ।

2 x 1 = 2

(क)



घर

(ख)



नल



Delhi Public School, Gandhinagar

Periodic Test -1(2019-20)

Class: I

Mathematics

Date: 08.07.19

Time: 1 hour

M. Marks: 20

Name: _____ Sec: _____ Roll No.: _____

General Instructions:

- All the questions are compulsory.
- Answer the questions as per the given instructions.

Q.I Fill in the missing numbers before, after or between:

$4 \times \frac{1}{4} = 1$

- a) 9 b) 4 6 c) 12 d) 16 18

Q.II Write the number names of the following numbers:

$4 \times \frac{1}{2} = 2$

- a) 12 - _____ b) 4 - _____
 c) 10 - _____ d) 5 - _____

Q.III Add the following numbers with the help of number line:

$2 \times 1 = 2$

a) $3 + 4 = \underline{\hspace{2cm}}$



b) $6 + 2 = \underline{\hspace{2cm}}$



Q.IV Arrange the following numbers from smallest to biggest:

$4 \times \frac{1}{2} = 2$

a)

4	10	8	16
Ans.			

b)

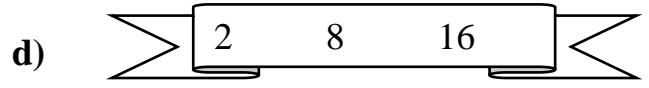
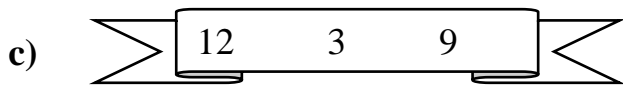
7	12	3	8
Ans.			

Q.V Circle the smallest number:

$4 \times \frac{1}{4} = 1$

a)

b)



Q.VI Arrange the following numbers from biggest to smallest:

$4 \times \frac{1}{2} = 2$

a)


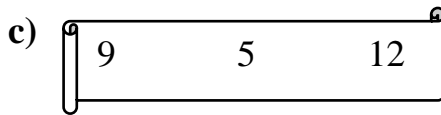

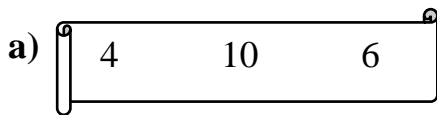
8	2	18	10
Ans.			

b)

4	13	6	2
Ans.			

Q.VII Circle the biggest number:

$4 \times \frac{1}{4} = 1$



**Q.VIII Put the (✓) for the correct answers and (x) for the wrong answers in
in the given box:**

$3 \times 1 = 3$



a) $6 + 1 = 4$

b) $5 + 3 = 8$

c) $3 + 1 = 4$

Q.IX Add the following numbers by drawing lines:

$4 \times 1 = 4$



Q.X Write the expanded form:

$2 \times 1 = 2$

a) $14 =$ _____ Ten and _____ ones.

b) $16 =$ _____ Ten and _____ ones.



Delhi Public School, Gandhinagar

Periodic Test- I (2019-20)

Class : I

ENGLISH

Date: 01.07.19

Time: 1 hour

M. Marks: 20

Name: _____ Sec: _____ Roll No: _____

General Instructions:

- All the questions are compulsory.
- Answer the questions as per given instructions.


Q.I Look at the pictures. Write the missing letters to complete the words and colour it:



r____t



p____n



s____n



d____g

4X1 = 4

Q.II Make sentences of the following words:

2x1=2

a) box- _____

b) brown- _____

Q.III Answer the following questions:

2x1=2

a) Where are Sameer and his family going?

Ans. Sameer and his family are going for a _____.

b) What is the name of little brown rat?

Ans. The name of little brown rat is _____.

Q.IV Write the Opposite of the given words:

4x1/2=2

a) tall- _____

c) wide- _____

b) many- _____

d) open- _____

Q.V Fill in the blanks with suitable Naming words from the given box.

3x1=3

book	Tom	monkey
-------------	------------	---------------

- a) A _____ is sitting on a branch of a tree.
- b) My _____ is on the table.
- c) _____ is going to school.

Q.VI Tick (✓) the correct answer from the options given in brackets:

4 x 1/2=2

- a) Tina has **(a/an)** umbrella and **(a/an)** raincoat.
- b) I want **(a/the)** cookie and **(an/a)** ice-cream.
- c) **(A/An)** egg is like **(a/an)** oval shape.
- d) **(A/The)** sun and **(a/the)** moon are far from us.

Q.VII Write five lines about 'Myself'

5x1=5

'Myself'

- 1. My name is _____.
- 2. I am a _____. (boy / girl)
- 3. I am _____ years old.
- 4. I study in class _____.
- 5. I live at _____ in Gujarat. (Ahmedabad / Gandhinagar)