



**Delhi Public School, Gandhinagar**  
**Periodic Test-I (2019-20)**

**Class II**

**Computer Science**

**Date: 05.08.19**

**Time: 1 hour**

**M. Marks: 10**

**Name: \_\_\_\_\_ Sec: \_\_\_\_\_ Roll No.: \_\_\_\_\_**

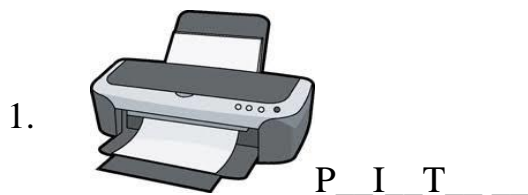
**General Instructions:**

- 1) All the questions are compulsory.
- 2) Answer the questions as per given instructions.

**Q-I Fill in the blanks by choosing the correct option. ½ \*4=2**

1. A computer cannot \_\_\_\_\_ .  
a) do calculations      b) draw pictures      c) think
2. A laptop computer works on \_\_\_\_\_ .  
a) laptop      b) electricity      c) fuel
3. \_\_\_\_\_ is used to fill colour in the drawing.  
a) Fill with color      b) Filling      c) Draw with color
4. The instructions that you give to a computer is called \_\_\_\_\_ .  
a) processing      b) input      c) output

**Q-II Complete the names of the parts connected to a computer by filling the missing letter. 1\*4=4**



**Q-III** Write **T** for True statement and **F** for False statement

$\frac{1}{2} * 4 = 2$

1. A computer is a electronic machine. \_\_\_\_\_
2. A computer cannot work continuously. \_\_\_\_\_
3. A computer need rest after work. \_\_\_\_\_
4. Laptop is bigger than desktop computer. \_\_\_\_\_

**Q-IV** Answer the following Questions.

$2 * 1 = 2$

1. What do we use the printer for ?

Ans: Printer prints your work on \_\_\_\_\_ .



# Delhi Public School, Gandhinagar

## Periodic Test-1 (2019-20)

**Class:II**

GK

**Date: 29.07.19**

**Time: 1 hour**

**M. Marks: 20**

**Name:** \_\_\_\_\_ **Sec:** \_\_\_\_\_ **Roll No.:** \_\_\_\_\_

**General Instructions:**

- 1) All the questions are compulsory.
- 2) Answer the questions as per given instructions

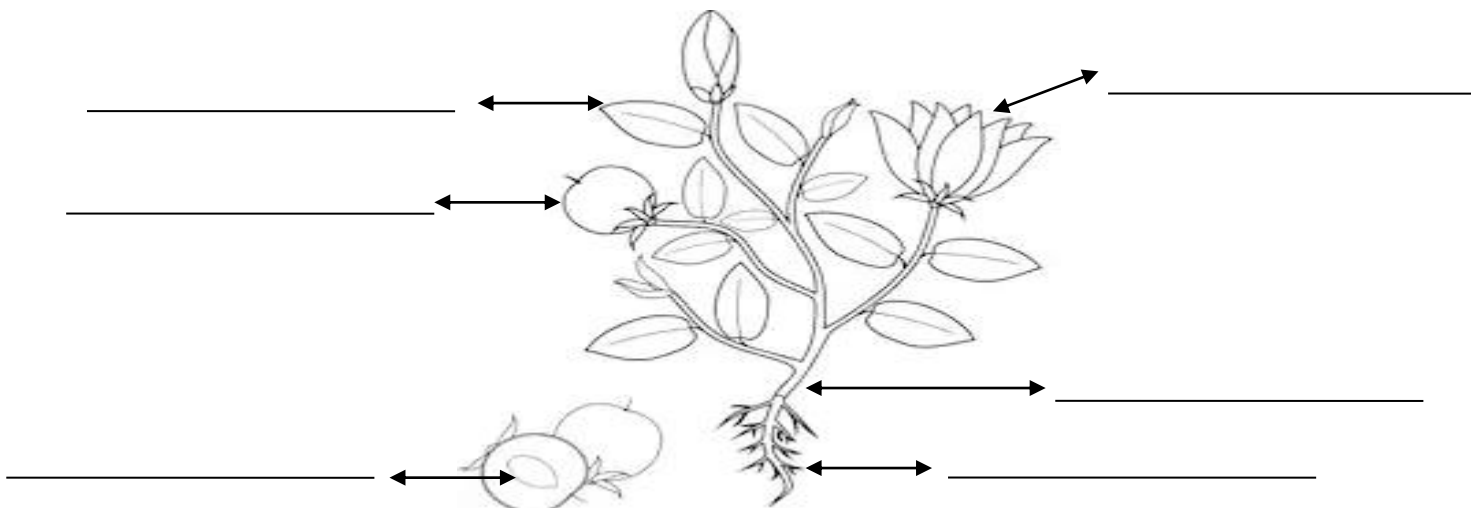
**Q-I Fill in the blanks with the help of words given in brackets. (8 x 1 = 8)**

Climbers, Scot, Lobsters, Vatican City,  
 Termites, London, 200, peach

1. In China, a \_\_\_\_\_ is a symbol of long life and good luck.
2. Chickens make over \_\_\_\_\_ different sounds to communicate.
3. \_\_\_\_\_ have blue blood.
4. \_\_\_\_\_ feed on wood and destroy buildings.
5. \_\_\_\_\_ are plants that need support to stand straight.
6. The people of Scotland are called \_\_\_\_\_.
7. St Peter's Basilica is situated in \_\_\_\_\_.
8. \_\_\_\_\_ is the capital of The United Kingdom.







**Q-II. Label the parts of a plant (6 x 1/2 = 3)**

(seed, roots, leaf, flower, fruit, stem)



**Q-III. Match the following.**

**(6 x 1/2 = 3)**

1. Swan		( ) Ottawa
2. Creeper		( ) Bhurj Khalifa
3. Capital of Germany		( ) Berlin
4. Dubai		( ) Coconut
5. Capital of Canada		( ) Swims in water
6. Lakshmi phal		( ) Pumpkin

**Q-IV. Answer the following questions.**

**(6 x 1 = 6)**

1. What is the name of the Director of your School?

Ans. \_\_\_\_\_

2. What is the name of the Principal of your School?

Ans. \_\_\_\_\_

3. On which date elections were held in Gujarat?

Ans. \_\_\_\_\_

4. What is the name of the Headmaster of your School?

Ans. \_\_\_\_\_

5. When do we celebrate Earth Day?

Ans. \_\_\_\_\_

6. What is the name of your Class Teacher?

Ans. \_\_\_\_\_



# Delhi Public School, Gandhinagar

## Periodic Test-I (2019-20)

**Class: II**

**Mathematics**

**Date: 22.07.19**

**Time: 1 hour**

**M. Marks: 20**

Name: \_\_\_\_\_ Sec: \_\_\_\_\_ Roll No.: \_\_\_\_\_

**General Instructions:**

- 1) All the questions are compulsory.
- 2) Answer the questions as per the given instructions.

**Q-I.Fill in the blanks.**

(6×½= 3)

- a.  $50 + 3 =$  \_\_\_\_\_
- b. 1 hundred + 4 tens + 2 ones = \_\_\_\_\_
- c.  $89$  \_\_\_\_\_  $109$  (Use  $>$ ,  $<$  sign.)
- d. Write the number for 8 tens and 5 ones \_\_\_\_\_
- e. The number after 79 is \_\_\_\_\_
- f. 100 more than 57 is \_\_\_\_\_

**Q-II. Add the following.**

(4×1= 4)

	<b>T</b>	<b>O</b>
	2	3
+	5	4

	<b>H</b>	<b>T</b>	<b>O</b>
		2	6
+		6	2

	<b>T</b>	<b>O</b>
	3	2
	2	5
+	1	1

	<b>T</b>	<b>O</b>
	5	6
	1	2
+	1	1

**Q-III. Write number names for the given numbers.**

(3×1= 3)

- a. 184 - \_\_\_\_\_
- b. 200 - \_\_\_\_\_
- c. 125 - \_\_\_\_\_

**Q-IV. Write the place value of underlined digit for following numbers. (4×½= 2)**

- a. 127 - \_\_\_\_\_
- b. 145 - \_\_\_\_\_
- c. 79 - \_\_\_\_\_
- d. 156 - \_\_\_\_\_

**Q-V. From the given box segregate the odd and even numbers and write in the given boxes.** (8×¼= 2)

22	54	39	13	85	46	77	88
----	----	----	----	----	----	----	----

Odd Number	Even Number

**Q- VI Arrange the following numbers in decreasing order.** (2×1= 2)

<b>a)</b>	79, 182, 175	Ans.:
<b>b)</b>	39, 139, 193	Ans.:

**Q-VII Fill in the boxes to find the word.** (8×¼= 2)

The **second** letter is H

The **third** letter is 'I'

The **fourth** letter is 'L'

The **seventh** letter is 'E'

The **first** letter is 'C'

The **fifth** letter is 'D'

The **eighth** letter is 'N'

The **sixth** letter is 'R'

--	--	--	--	--	--	--	--	--	--

**Q-VIII Story sum.** ( 2)

**a.** Sahil has 72 books. Sonu has 23 books. How many books do they have all together?

---



---



---



<b>H</b>	<b>T</b>	<b>O</b>

Ans: \_\_\_\_\_



**Delhi Public School, Gandhinagar**  
**Periodic Test-1(2019-20)**

**Class:II**

**English**

**Date: 15.07.19**

**Time: 1 hour**

**M. Marks: 20**

**Name: \_\_\_\_\_ Sec: \_\_\_\_\_ Roll No.: \_\_\_\_\_**

**General Instructions:**

- 1) All the questions are compulsory.
- 2) Answer the questions as per given instructions.

**Q-I Read the passage carefully and answer the following questions.**

Today, Nancy and her family went to zoo. It's Nancy's birthday. She is eight years old. She loves animals. At the zoo, Nancy see many animals. Her favourite animal is elephant. She also likes tiger. She had lots of fun at the zoo. She loves to visit the zoo.

**Q.1. Who visited the zoo? 1**

Ans. \_\_\_\_\_

**Q.2. How old is Nancy? 1**

Ans. \_\_\_\_\_

**Q.3. Fill in the blanks. 1**

a. Her favourite animal is the \_\_\_\_\_

b. She loves to visit the \_\_\_\_\_.

**Q.4. Find the opposites from the given passage. 2**

a. new - \_\_\_\_\_                      b. hate - \_\_\_\_\_

**Q-II Choose the correct word for the given meaning. ( 4 x 1/2 =2)**

ever after,	scratches,	squawked,	powerful
-------------	------------	-----------	----------

1. made a loud sharp sound                      - \_\_\_\_\_

2. always    - \_\_\_\_\_

3. very strong                                      - \_\_\_\_\_

4. cuts on the skin made by something sharp                      - \_\_\_\_\_

**Q-III Make sentences.**

**(2 x 1=2)**

1. beautiful - \_\_\_\_\_

2. bell - \_\_\_\_\_

**Q-IV Answer the following questions.**

**(2 x 2 = 4)**

Q.1. What was Chhuk-Chhuk's reaction when it heard the words of praise?

Ans. \_\_\_\_\_

\_\_\_\_\_

Q.2. What happened when the children saw the toy train moving?

Ans. \_\_\_\_\_

\_\_\_\_\_

**Q-V a] Classify the Common nouns and Proper nouns in the given boxes.(6 x 1/2 =3)**

Yamuna    duster    book    Prem    computer    Red Fort

Common Nouns	Proper Nouns
1.	1.
2.	2.
3.	3.

**b] Change the following Singular Nouns into Plural Nouns.**

**(4 x 1/2 = 2)**

1. brush - \_\_\_\_\_                      3. knife - \_\_\_\_\_

2. cherry - \_\_\_\_\_                      4. man - \_\_\_\_\_

**c] Rewrite the following sentences by changing the Gender of the underlined words.**

**(2 x 1=2)**

1. My sister dances very well.

Ans. \_\_\_\_\_

2. They have brought a new lion to the zoo.

Ans. \_\_\_\_\_





Delhi Public School, Gandhinagar  
Periodic Test I (2019-20)

Class: II

Hindi

Date: 08.07.19

Time: 1 hour

M. Marks: 20

Name: \_\_\_\_\_ Sec: \_\_\_\_\_ Roll No: \_\_\_\_\_

निर्देश:

- ✓ सभी प्रश्न अनिवार्य हैं ।
- ✓ निर्देशानुसार प्रश्नों के उत्तर लिखिए ।

प्रश्न-1 नीचे दिए गए गद्यांश को पढ़कर प्रश्नों के उचित उत्तर लिखिए । (4x1=4)

कुसुम और गीता एक दिन सरकस देखने गये । कुसुम और गीता ने सरकस में शेर को देखा । शेर पिंजरे में जोर से दहाड़ रहा था । उन्होंने सरकस में जादूगर भी देखा । उन्हें सरकस में बहुत मजा आया ।

प्रश्न क ) कुसुम और गीता एक दिन क्या देखने गये ?

उत्तर: -----

प्रश्न ख ) कुसुम और गीता ने सरकस में क्या देखा ?

उत्तर: -----  
-----

प्रश्न ग ) सही उत्तर पर ✓ व गलत उत्तर पर X के निशान लगाइए

अ ) शेर पिंजरे में सो रहा था । -----

ब ) कुसुम और गीता को सरकस में बहुत मजा आया । -----

प्रश्न घ ) दिए गए गद्यांश में से कोई दो संज्ञा शब्द चुनकर लिखिए ।

उत्तर -----

प्रश्न-2 नीचे दिए गए शब्दों के सही अर्थ चुनकर लिखिए।

(4x<sup>1/2</sup>=2)

अनेक,	ऐलान,	बुद्धिमानी,	राग
-------	-------	-------------	-----

क ) एक से अधिक - ----- ख ) घोषणा - -----

ग ) समझदारी - ----- घ ) संगीत का स्वर - -----

प्रश्न 3 नीचे दिए गए प्रश्नों के सही उत्तर लिखिए :-

(2x1=2)

क ) बीरबल ने खींची हुई रेखा कैसे छोटी की ?

उत्तर : -----  
-----

ख ) कविता म किस किस को अनेक बताया ह?

उत्तर : -----  
-----

प्रश्न 4 नीचे दिए गए शब्दों का वाक्यों में प्रयोग कीजिए :-

(2x1=2)

क ) भारत - -----

ख ) गीत - -----

प्रश्न 5 नीचे दिए गए शब्दों के समानार्थी शब्द लिखिए :-

(2x<sup>1/2</sup>=1)

क ) धरती - -----

ख ) दुनिया - -----

प्रश्न 6 नीचे दिए गए वाक्यों में संज्ञा शब्दों पर गोला कीजिए :-

(4x<sup>1/2</sup>=2)

क ) अनमोल पढाई कर रहा है ।

ख ) रमन गाना गा रहा है ।

ग ) घोड़ा दौड़ रहा है ।

घ ) बगीचे में फूल खिले हैं ।

प्रश्न 7 नीचे दिए गए संयुक्त व्यंजनों के प्रयोग से दो - दो शब्द बनाकर लिखिए :- (2x1=2)

क ) च्च -----

ख ) क्क -----

प्रश्न 8 रेखांकित शब्दों के लिंग बदलकर वाक्य दोबारा लिखिए :- (4x1/2=2)

क ) माता अखबार पढ़ रही है ।

-----

ख ) बहन खाना खा रही है ।

-----

ग ) माली फूल लाया ।

-----

घ ) मोर नाच रहा है ।

-----

प्रश्न 9 “ मेरा परिचय ” शीर्षक पर तीन वाक्य लिखिए :- (3)

-----

-----

-----

-----



**Delhi Public School, Gandhinagar**  
**Periodic Assessment I (2019-20)**

**Class: II**

**EVS**

**Date: 01.07.19**

**Time: 1 hour**

**M. Marks: 20**

**Name: \_\_\_\_\_ Sec: \_\_\_\_\_ Roll No.: \_\_\_\_\_**

**General Instructions:**

- 1) All the questions are compulsory.
- 2) Answer the questions as per the given instructions.

**Q.I Choose the correct options from the given bracket and fill in the blanks. (6×½= 3)**  
**(shrub, wheat, grapes, tree, leaves, climber)**

1. We make bread and chapatti from this seed. \_\_\_\_\_
2. The plant makes its food here. \_\_\_\_\_
3. A bushy plant. \_\_\_\_\_
4. This fruit grows on a climber. \_\_\_\_\_
5. A tall and strong plant. \_\_\_\_\_
6. A plant that cannot stand on its own. \_\_\_\_\_

**Q.II Give two examples for the following (5×1= 5)**

1. Trees

- a. \_\_\_\_\_ b. \_\_\_\_\_

2. Climbers

- a. \_\_\_\_\_ b. \_\_\_\_\_

3. Leaves we eat

- a. \_\_\_\_\_ b. \_\_\_\_\_

4. Seeds we eat

- a. \_\_\_\_\_ b. \_\_\_\_\_

5. Roots we eat

- a. \_\_\_\_\_ b. \_\_\_\_\_

**Q.III Who am I?**

**(4×1= 4)**

1. The plant that needs support of a wall, stick or another plant to climb up. \_\_\_\_\_
2. Plants with soft stems and usually green. \_\_\_\_\_
3. This is a red coloured root. \_\_\_\_\_
4. The biggest strong and tall plants are called. \_\_\_\_\_

**Q.IV Answer the following questions.**

**(2×2= 4)**

Q.1 Where does the plant make its food?

Ans. \_\_\_\_\_  
\_\_\_\_\_

Q.2 Which type of plants have hard and thin stems?

Ans. \_\_\_\_\_  
\_\_\_\_\_

**Q. V Draw, name and colour the following in the given boxes**

**(2×2= 4)**

**1. Any two roots of plant we eat as vegetables:**

--	--

**2. Any two examples of creepers**

--	--