



Delhi Public School, Gandhinagar

Periodic Test - II (2019-20)

Class: I

Mathematics

Date: 09.12.19

Time: 1 hour

M. Marks: 20

Name: _____ Sec: _____ Roll No.: _____

General Instructions:

- All the questions are compulsory.
- Answer the questions as per given instructions

Q. I Fill in the blanks:

5X1=5

a. $2 \times 3 =$ _____

b. $50 - 1 =$ _____

c. A triangle has _____ sides.

d. $2 \text{ Tens} + 3 \text{ Ones} =$ _____

e. $85 + 1 =$ _____

Q.II Write the expanded form:

2X½=1

a. $93 =$ Tens and Ones

b. $72 =$ Tens and Ones

Q. III If 4 glasses of water can fill 1 jug



1X1=1

Colour the number of glasses required to fill 2 jugs.



Q.IV Solve the followings:

5X1=5

	T	O
	2	1
+	6	7

	T	O
	8	9
-	1	2

	T	O
	6	7
-		1

	T	O
	4	0
+	1	5

	T	O
	1	1
+	3	3

Q.V Story sums:

2X2=4

a. There are **45** blue pens and **31** black pens. How many pens are there in all?

Number of blue pens	T	O
Number of black pens		
Total		

Ans. There are pens in all.

b. Siya had **23** books. She sold **11** books. How many books are left with her?

Number of books Siya had	T	O
Number of books she sold		
Left		

Ans. books are left with Siya.

Q.VI Complete the given patterns:

12X¼=3

a.

○	△	○	△				
---	---	---	---	--	--	--	--

b.

M	A	P	M				
---	---	---	---	--	--	--	--

c.

→	↑	→	↑				
---	---	---	---	--	--	--	--

Q.VII Count and write the number of shapes given below:

4X¼=1



= _____

= _____

= _____

= _____



Delhi Public School, Gandhinagar

Periodic Test-II (2019-20)

Class:I

Hindi

Date: 16.12.19

Time: 1 hour

M. Marks: 20


Name: _____ Sec: _____ Roll No.: _____


निर्देश:

- सभी प्रश्न अनिवार्य हैं।
- निर्देशानुसार प्रश्नों के उत्तर लिखिए।


प्रश्न १. चित्र देखकर वाक्य पूरे कीजिए।

4x½=2

(१) राम _____  लेकर चल।

(२) गणेश _____  बजा।

(३) सीता _____  देख।

(४) आकाश _____  चला।

प्रश्न २. वाक्य रचना कीजिए।

3x1=3

(१) लौकी - _____

(२) पौधा - _____

(३) नैनीताल - _____

प्रश्न ३. ओ (ो) व औ (ौ) की मात्रा लगाकर शब्द पूरे कीजिए।

4x½=2

(१) सम____सा (२) खिल____ना (३) म____सी (४) ट____करी

प्रश्न ४. किन्ही चार सब्जियों के नाम लिखिए।

4x½=2

(१) _____ (२) _____ (३) _____ (४) _____





प्रश्न ५. किन्हीं चार पक्षियों के नाम लिखिए।

4x½=2

(१) _____ (२) _____ (३) _____ (४) _____

प्रश्न ६. वर्णों को सही क्रम में लगाकर चित्रों के नाम लिखिए।

4x½=2

(१) जोरक - _____ 	(३) लियातौ - _____ 
(२) निसैक - _____ 	(४) तातो- _____ 

प्रश्न ७ . नीचे दिए गए खाली स्थान भर कर मेरा परिचय पूरा कीजिए।

4x1=4

(१) मेरा नाम _____ है।

(२) मैं एक _____ हूँ (लड़का / लड़की) ।

(३) मैं _____ साल का / की हूँ।

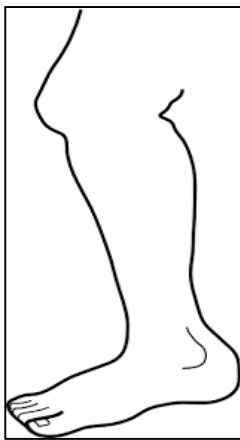
(४) मैं _____ कक्षा में पढ़ता / पढ़ती हूँ।

प्रश्न ८. ऐ की मात्रा वाले चित्र में पीला रंग और औ की मात्रा वाले चित्र में लाल


रंग भरिए व चित्रों के नाम लिखिए।

2x1½=3

(१)



(२)





Delhi Public School, Gandhinagar
Periodic Test-II (2019-20)

Class: I

English

Date: 02.12.19

Time: 1 hour

M. Marks: 20

Name: _____ Sec: _____ Roll No.: _____

General Instructions:

- All the questions are compulsory.
- Answer the questions as per the given instructions.

Q. I Read the given passage and write the answer of the following questions: 4x1=4

My name is Tina. I have a pet. It is a rabbit. It's name is Bunny. It is as white as snow. It runs very fast. It eats carrots. It is my friend. I play with it every day.



1. Fill in the blanks:

- (a) The name of the girl is _____.
- (b) The name of her pet is _____.
- (c) It is _____ as snow.

2. Find opposites from the given passage of the following words:

- (a) slow- _____
- (b) black- _____

Q.II Make sentences of the following words: 3x1=3

- (a) ice-cream - _____
- (b) hungry - _____
- (c) bush - _____

Q.III Answer the following questions: 2x1=2

- (a) Where did Raman and his parents go?

Ans. _____

(b) What did the frog spot on top of a hill?

Ans. _____

Q.IV Circle the correct option to complete the given sentences:

6x¹/₂=3

- (a) I **has** / **have** two story books. (b) Mini **has** / **have** a doll.
(c) The girls **has** / **have** toys. (d) Neelam **has**/**have** an apple.
(e) She **have** / **has** a bag. (f) I **has**/**have** a dog.

Q.V Look at the pictures and fill in the blanks with the help of correct Prepositions given in the bracket:

4x¹/₂= 2

(a) The boy is sitting _____ the tree. (**under** / **behind**)




(b) The cup is _____ the table. (**on** / **under**)



(c) The birds are flying _____ the sky. (**under**/ **in**)



(d) The Sun is _____ the clouds. (**behind** / **in**)



Q.VI Circle the correct young ones of the following animals:

4x¹/₂= 2

- (a) hen- **chick** / **cub** (b) dog- **piglet** / **puppy**
(c) lion- **lamb** / **cub** (d) cat- **kitten** / **kid**

Q.VII Write four lines about “My Sister”:

4x1=4

- (a) _____
(b) _____
(c) _____
(d) _____